
Appendix 1: List of Geologically Important Elements and the Periodic Table

The following table includes 36 of the geologically important elements, listed alphabetically by their element name, along with their atomic number and the atomic mass of their most stable isotope.

The geologically most important elements are bolded identified with a tilde (~), and the eight main elements of silicate minerals are identified with an asterisk (*).

36 important geological elements, listed alphabetically by their element name, along with their atomic number and the atomic mass of their most stable isotope

Symbol	Name	Atomic Number	Atomic Mass
Al*	Aluminum	13	27
As	Arsenic	33	75
Ba	Barium	56	137
Be	Beryllium	4	9
B	Boron	5	11
Cd	Cadmium	48	112
Ca*	Calcium	20	40
C~	Carbon	6	12
Cl~	Chlorine	17	35
Cr	Chromium	24	52
Co	Cobalt	27	59
Cu~	Copper	29	64
F~	Fluorine	9	19
Au~	Gold	79	197
He	Helium	2	4
H~	Hydrogen	1	1
Fe*	Iron	26	56
Pb~	Lead	82	207
Mg*	Magnesium	12	24
Mn~	Manganese	25	55
Mo	Molybdenum	42	96
Ne	Neon	10	20
Ni~	Nickel	28	59
N	Nitrogen	7	14
O*	Oxygen	8	16
P~	Phosphorus	15	31
Pt	Platinum	78	195
K*	Potassium	19	39

Symbol	Name	Atomic Number	Atomic Mass
Si*	Silicon	14	28
Ag	Silver	47	108
Na*	Sodium	11	23
Sr	Strontium	38	88
S~	Sulfur	16	32
Ti~	Titanium	22	48
U	Uranium	92	238
Zn~	Zinc	30	65

The periodic table is a list of all of the elements arranged in groups according to their atomic configuration. In this table the elements are colour-coded according to their chemical and physical properties.

For an accessible version of the periodic table please see [Syngenta Period Table of Elements](#).

Group	1	2	3	4	5	6	7	8	9	10	11	12	13	14	15	16	17	18
	Alkali metals	Alkaline earth metals													pnictogens	Chalogens	Halogens	Noble gases
Period	Hydrogen																	Helium
1	1 H																	2 He
2	3 Li	4 Be											5 B	6 C	7 N	8 O	9 F	10 Ne
3	11 Na	12 Mg											13 Al	14 Si	15 P	16 S	17 Cl	18 Ar
4	19 K	20 Ca	Scandium	Titanium	Vanadium	Chromium	Manganese	Iron	Cobalt	Nickel	Copper	Zinc	Gallium	Germanium	Arsenic	Selenium	Bromine	Krypton
5	37 Rb	38 Sr	Yttrium	Zirconium	Niobium	Molybdenum	Technetium	Ruthenium	Rhodium	Palladium	Silver	Cadmium	Indium	Tin	Antimony	Tellurium	Iodine	Xenon
6	55 Cs	56 Ba	Lutetium	Hafnium	Tantalum	Tungsten	Rhenium	Osmium	Iridium	Platinum	Gold	Mercury	Thallium	Lead	Bismuth	Polonium	Astatine	Radon
7	87 Fr	88 Ra	Lawrencium	Rutherfordium	Dubnium	Seaborgium	Bohrium	Hassium	Mitnerium	Darmstadtium	Roentgenium	Copernicium	Ununtrium	Flerovium	Ununpentium	Livermorium	Ununseptium	Ununoctium
			Lanthanum	Cerium	Praseodymium	Neodymium	Promethium	Samarium	Europium	Gadolinium	Terbium	Dysprosium	Holmium	Erbium	Thulium	Ytterbium		
			57 La	58 Ce	59 Pr	60 Nd	61 Pm	62 Sm	63 Eu	64 Gd	65 Tb	66 Dy	67 Ho	68 Er	69 Tm	70 Yb		
			Actinium	Thorium	Protactinium	Uranium	Neptunium	Plutonium	Americium	Curium	Berkelium	Californium	Einsteinium	Fermium	Mendelevium	Nobelium		
			89 Ac	90 Th	91 Pa	92 U	93 Np	94 Pu	95 Am	96 Cm	97 Bk	98 Cf	99 Es	100 Fm	101 Md	102 No		
	black=solid	green=liquid	red=gas	grey=unknown	Color of the atomic number shows state of matter (at 0 °C and 1 atm)													
	Primordial	From decay		Synthetic														
	Background color shows subcategory in the metal-metalloid-nonmetal trend:																	
	Metal																	
	Alkali metal	Alkaline earth metal	Lanthanide	Actinide	Transition metal	Post-transition metal	Metalloid	Polyatomic nonmetal	Diatom nonmetal	Noble gas	Unknown chemical properties							

Appendix 2: Answers to Review Questions

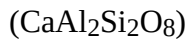
The following are suggested answers to the review questions at the end of chapters in Physical Geology. Answers to the exercises are provided in [Appendix 3](#).

[Chapter 1](#)

1. Geology involves integration of various different sciences (chemistry, physics, and biology for example), but also requires an understanding of the importance of billions of years of geological time.
2. Paleontology is an important aspect of geology and requires an understanding of biology, including evolution, the physiology of animals and plants and ecological relationships.
3. Geologists provide information to reduce the risk of harm from hazards such as earthquakes, volcanoes, and slope failures; they play a critical role in the discovery of important resources; they contribute to our understanding of life and its evolution through paleontological studies; and they play a leading role in the investigation of climate change, past and present and its implications.
4. Halite is composed of sodium (Na) and chlorine (Cl) with the Na⁺ and Cl⁻ ions alternating with one another in all three directions within a cubic structure.
5. A mineral has a specific chemical composition and lattice structure. Rocks are made out of minerals, and most rocks contain several different types of minerals.
6. The main component of Earth's core is iron (Fe).
7. Transfer of heat from the core to the mantle leads to heating of lower mantle rock. When heated, the rock expands and its density is reduced. Because the mantle is plastic, this lower-density material tends to rise toward the surface, and cooler denser mantle material moves in to take its place.
8. Mantle convection creates the traction that can force plates to move around on the surface.
9. Hot mantle rock moving toward the surface partially melts because the pressure is reduced. The magma produced moves upward into cracks in the crust and is extruded onto the sea floor.
10. $215 - 65 = 150$ Ma. Since the age of the Earth is 4570 Ma, this represents $150 \div 4,570 = 0.033$ or 3.3% of geological time.
11. At 1 mm/y, 30,000,000 mm would accumulate over that 30 million years. This is equivalent to 30,000 metres or 30 kilometres. Few sequences of sedimentary rock are even close to that thickness because most sediments accumulate at much lower rates, more like 0.1 millimetre per year.

Chapter 2

1. Charges: proton: +1, neutron: 0, electron: -1, Masses: proton: 1, neutron: 1, electron: almost 0.
2. The element's atomic number will determine the extent to which its outer layers are populated with electrons. If the outer shell is not quite full, the atom may gain electrons to fill them and become an anion (negative charge). If the outer shell has only a few electrons, it may lose them and become a cation (positive charge). Cations and anions attract each other to form molecules with ionic bonding.
3. Helium and neon (and the other noble gases) have complete outer shells and therefore no tendency to form ionic bonds.
4. Electrons are transferred from one atom to another to form an ionic bond. Electrons are shared between atoms to form a covalent bond.
5. An anion has a negative charge and a cation has a positive charge.
6. Minerals are classified into groups based on their anion or anion group.
7. Name the mineral group for the following minerals:
 1. calcite – CaCO_3 , carbonate
 2. gypsum – CaSO_4 , sulphate
 3. hematite – Fe_2O_3 , oxide
 4. quartz – SiO_2 , silicate
 5. biotite – silicate
 6. galena – PbS , sulphide
 7. graphite – C, native
 8. fluorite – CaF_2 , halide
 9. pyrite – FeS_2 , sulphide
 10. orthoclase – KAlSi_3O_8 , silicate
 11. magnetite – Fe_3O_4 , oxide
 12. olivine – MgSiO_4 , silicate
8. An unbonded silica tetrahedron has one Si ion (+4 charge) and 4 oxygens (-2 charge each) so the overall charge is $4 - 8 = -4$ for SiO_4^{-4}
9. Magnesium can substitute freely for iron in olivine and several other minerals because they have similar charges (+2) and similar ionic radii.
10. Pyroxene is made up of single chains of tetrahedra while amphibole is made up of double chains.
11. Biotite includes iron and/or magnesium in its formula, while muscovite does not.
12. The two end-members of the plagioclase series are Albite ($\text{NaAlSi}_3\text{O}_8$) and Anorthite



13. In quartz each silica tetrahedron is bonded to four other tetrahedra, and since oxygens are shared at each bond the overall ratio is silicon (+4) to two oxygens ($2 \times -2 = -4$), which is balanced.
14. Some minerals have distinctive colours, but many have a wide range of colours due to differing impurities.
15. Glass has a Mohs hardness of about 5.5 while porcelain is close to 6.5. The mineral is between these two, so it must be close to 6.

Chapter 3

1. The rock must be exposed at surface so in many cases uplift and removal of overlying sediments is required. Then chemical and/or physical weathering can take place, which reduces the rock to smaller loose fragments. These fragments are sediments that can be eroded and then transported by a variety of mechanisms.
2. Sediments are buried beneath other sediments where, because of the increased pressure, they become compacted and dewatered. With additional burial they are warmed to the point where cementing minerals can form between the grains (less than 200°C).
3. Rock is buried within the crust and heated because of the geothermal gradient. At temperatures over 200°C some of the existing minerals may become unstable and will be converted to new minerals, or recrystallized into larger crystals.
4. As the temperature decreases minerals that formed early (e.g., olivine) may react with the remaining magma to form new minerals (e.g., pyroxene).
5. Calcium-rich plagioclase forms early on in the cooling process of a magma, but as the temperature drops, a more sodium-rich variety forms around the existing crystals.
6. Early-forming minerals, which are typically quite dense (e.g., olivine) may sink to the bottom of the magma chamber (if the magma is not too viscous) and thus become separated from the rest of the magma, resulting in a change to the composition of the remaining magma (it becomes more felsic).
7. If the texture is aphanitic the crystals are too small to see without a microscope. In rocks with phaneritic textures the minerals are large enough to see and distinguish from each other with the naked eye. The dividing line is somewhere between 0.1 and 1 mm, depending on the minerals.
8. In porphyritic rocks there are two distinct crystal sizes that are indicative of two stages of cooling (slow then fast). The fine material can range from glass to several mm, as long as the coarse crystals are distinctively larger. In pegmatitic rocks the crystals are consistently coarser than 1 cm, and can be much larger. Pegmatites form the slow cooling of water-rich magmas.
9. Name the following rocks:
 1. An extrusive rock with 40% Ca-rich plagioclase and 60% pyroxene is basalt.

2. An intrusive rock with 65% plagioclase, 25% amphibole, and 10% pyroxene is diorite.
 3. An intrusive rock with 25% quartz, 20% orthoclase, 50% plagioclase, and minor amounts of biotite is granite.
10. A concordant body (a sill) is parallel to any pre-existing layering (bedding or foliation) in the country rock is. A discordant body (a dyke) cuts across any pre-existing layering or is situated at any angle in country rock that has no layering (e.g., granite).
 11. A rock has to crack in order for a dyke to intrude into it, and it has to be cool to crack. When the hot magma intrudes into the cold country rock its margins cool quickly (forming small crystals), while its centre cools more slowly (forming larger crystals).
 12. A batholith has an exposed area of greater than 100 km²; a stock has an exposed area less than that.
 13. Batholiths (or stocks) intrude into existing rock by (a) melting through the country rock, or (b) causing the country rock to break and fall into the magma (stoping), or (c) pushing the country rock aside.
 14. Compositional layering forms when early-crystallizing mineral sink toward the bottom of a magma chamber. This can only happen in non-viscous magma, and mafic magma is typically much less viscous than felsic magma.

Chapter 4

1. The three main tectonic settings for volcanism are (1) subduction zones at convergent plate boundaries, (2) divergent plate boundaries, and (3) mantle plumes (a.k.a. hot spots).
2. The primary mechanism for partial melting at a convergent plate boundary is the addition of water to hot mantle rock. The water reduces the melting temperature of the rock (flux melting).
3. The explosiveness of a volcanic eruption depends on the pressure of the magma. Gases create that pressure, and if the magma is viscous those gases cannot escape easily. Felsic and intermediate magmas tend to have more gas than mafic magmas, and are also more viscous, trapping the gas in.
4. When magma is deep within the crust the pressure is too high for the gases to bubble out of solution.
5. Pillow lavas form where mafic lava erupts in water. When the magma oozes out into the water the outside cools first forming a hard skin that maintains the pillow shape.
6. Composite volcanoes can produce rocks with a wide range of textures, including (1) aphanitic or porphyritic rock from lava flows, (2) pyroclastic rock (with textures ranging from fine ash to coarse fragments) from explosive eruptions, and (3) sedimentary rock from lahars.
7. A lahar is a mud flow or debris flow on a volcano. Lahars are common on composite volcanoes because they are steeper than shield volcanoes, they typically have ice and snow,

and they are not as strong as shield volcanoes.

8. Some lahars form during an eruption when snow and ice melt quickly, while others may form from heavy rain.
9. The magma at shield volcanoes is typically non-viscous. It can flow easily and also tends to form lava tubes, and thus is able to extend a long way from the vent, forming a low broad shield.
10. Shield volcanoes tend to have much longer lives than composite volcanoes. Most of the Hawaiian shields, for example lasted 1 million years, while most composite volcanoes are younger than 100,000 years.
11. Weak seismic activity is associated with all stages of a volcanic eruption. In the early stages magma is moving at depth and pushing rock aside, creating small earthquakes. The flow of magma can also produce special type of seismic response known as harmonic tremor.
12. GPS technology is used to determine if there is any slow deformation of the flanks of a volcano related to movement of magma toward the surface.
13. The Mt. St. Helens columnar basalts were formed by a flow of mafic lava.
14. The Nazko Cone is thought to be related to a mantle plume.
15. No one is certain why there a lower rate of volcanism in B.C. than in adjacent Washington and Oregon, but one theory is that the northern part of the Juan de Fuca Plate (the Explorer Plate) is not subducting as quickly as the rest of the plate.
16. It is likely that carbon dioxide released during the eruption flowed downhill from the volcano to the village on the shore of the Nass River.

Chapter 5

1. Before a rock can be exposed at surface it has to be uplifted from where it formed deep in the crust, and the material on top has to be eroded.
2. Frost wedging is most effective at times when the weather swings between freezing at night and thawing during the day. In cold parts of B.C. that only happens consistently in spring and fall. In warmer regions it only happens consistently during the winter.
3. Under conditions of strong chemical weathering, feldspar albite ($\text{NaAlSi}_3\text{O}_8$) will be converted to a clay (such as kaolinite) and sodium ions in solution. Where mechanical weathering is predominant, albite will be broken into small pieces.
4. Acid rock drainage (ARD) creates acidic stream runoff and also enhances the solubility of a wide range of metals, some of which can be toxic.
5. Feldspar-rich sand is formed in areas where granitic rocks are being weathered and where mechanical weathering is strongly predominant over chemical weathering.
6. Most of the clay that forms during hydrolysis of silicate minerals ends up in rivers and is washed out to the oceans. There it eventually settles to the sea floor.
7. The mineral composition of the parent rock or sediment will influence the composition of the

resulting soil. Slope is important because it will affect the degree to which materials will be eroded.

8. Clay minerals and iron move downward to produce the B horizon of a soil.
9. Removal of vegetation leaves soil exposed to erosion by water, and wind are the main processes of soil erosion in Canada.
10. Chernozemic soils are common in the southern prairies and parts of the BC southern interior, in areas that experience water deficits during the summer.
11. Luvisolic soils are found in central B.C., mostly over sedimentary rocks.
12. The weathering of feldspar to clay involves the conversion of atmospheric carbon dioxide to dissolved bicarbonate, which ends up in the ocean.

Chapter 6

1. Sand grains range in size from 1/16 mm to 2 mm.
2. Both silt and clay feel smooth between your fingers, but only clay feels smooth in your mouth.
3. The key factor is particle size (not density). Settling velocity is controlled by the friction around the grain holding it up and the gravitational force pushing it down. The gravitational force is proportional to the grain volume and the friction is proportional to the surface area.
4. Conglomerate cannot be deposited by a slow-flowing river because clasts larger than 2 mm are not transported by slow-moving water.
5. Sediments are buried beneath other sediments where, because of the increased pressure, they become compacted and dewatered. With additional burial they are warmed to the point where cementing minerals can form between the grains (less than 200°C).
6. Lithic arenite has less than 15% silt- and clay-sized particles, while a lithic wacke has more than 15%. Both have more than 10% rock fragments and more rock fragments than feldspar.
7. Feldspathic arenite has more than 10% feldspar and more feldspar than rock fragments. Quartz arenite has less than 10% feldspar and less than 10% rock fragments. Both have less than 15% silt and clay.
8. Source area lithology: rock that contains quartz (such as granite or sandstone), strong weathering to remove feldspar, long fluvial transportation to round the grains.
9. The carbon within carbonate deposits such as limestone originally comes from the atmosphere.
10. Most of Earth's banded iron formations formed during the initial oxygenation of the atmosphere between 2.4 and 1.8 Ga because iron that had been soluble in the anoxic oceans became insoluble in the oxidized oceans.
11. Terrestrial depositional environments: rivers, lakes, deltas, deserts, glaciers. Marine depositional environments: continental shelves, continental slopes, deep ocean.
12. A foreland basin forms in the vicinity of a large range of mountains where the weight of the

mountains depresses the crust on either side. A forearc basin lies between a subduction zone and the related volcanic arc.

1. Bedding forms where there is an interruption or change in the depositional process, or a change in the composition of the material being deposited.
 2. Cross-bedding forms in fluvial or aeolian environments where sand-sized sediments are being moved and ripples or dunes are present.
 3. Graded bedding
 4. Mud cracks form where fine-grained (silt or clay) sediments are allowed to dry because the level of a lake decreases.
13. Reverse graded bedding forms during gravity flows, such as debris flows.
 14. A formation is a series of beds that is distinct from other beds above and below it, and is thick enough to be shown on the geological maps that are widely used within the area in question.
 15. The Nanaimo Group was actively mined for coal for many decades. During that time the names were given to members and individual beds that were important to the coal miners.

Chapter 7

1. Heat and pressure are the main agents of metamorphism. Heat leads to mineralogical changes in the rock. Pressure also influences those mineralogical changes, while directed pressure (greater pressure in one direction) leads to foliation.
2. At very low, low, medium, and high metamorphic grades, mudrock will be transformed into slate, phyllite, schist, and gneiss.
3. Granite remains largely unchanged at lower metamorphic grades because its minerals are still stable at those lower temperatures.
4. Foliation exists because as new minerals are forming in a situation of directed pressure they are forced to grow with their long axes perpendicular to the main pressure direction.
5. At a spreading ridge the heat from volcanism leads to the development of a groundwater convection system in the oceanic crustal rock. Heated water rises in the hot regions and is expelled into the ocean, while cold ocean water is drawn into the crust to replace it. The heated water leads to the conversion of ferromagnesian minerals (e.g., olivine and pyroxene) into chlorite and serpentine.
6. The geothermal gradient varies as a function of tectonic setting, being greatest in volcanic regions and lowest along subduction zones. As a result the depth at which specific metamorphic grades is achieved will vary (greater depth where the gradient is least).
7. The geothermal gradient is low within subduction zones (because the cold subducting oceanic crust takes a long time to heat up), so while pressure increases at the normal rate the temperature does not.
8. In order of increasing metamorphic grade: chlorite biotite, garnet, sillimanite.

9. The rocks at significant depth in the crust are already hot and subject to regional metamorphism, so the additional heat from a pluton doesn't make a large difference.
10. Water from any source facilitates metamorphism. Magmatic fluids typically contain dissolved ions at higher levels than in regular groundwater (especially copper, zinc, silver, gold, lithium, beryllium, boron and fluorine) so can lead to formation of a unique set of minerals.
11. Metasomatism involves fluids from magmatic or groundwater sources that play an important role in transporting ions and leading to the formation of new minerals.
12. A hot pluton heats the surrounding water and this contributes to the development of a convection system in the groundwater, which can result a great deal of water, in some cases with elevated levels of specific ions, passing through the rock. Magmatic water also contributes to metasomatism.
13. Limestone must be present in the country rock to produce a skarn.
14. Two things that a geologist first considers when looking at a metamorphic rock are what the parent rock might have been, and what type of metamorphism has taken place.

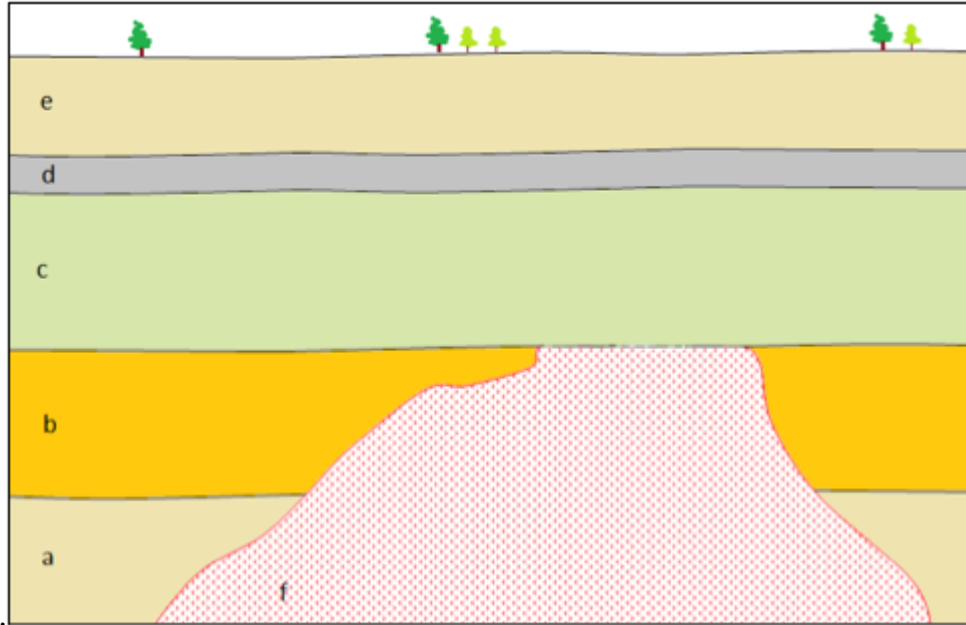
Metamorphic Rock	Likely Parent Rock	Grade and/or Type of Metamorphism
1. Chlorite schist	A rock enriched in ferromagnesian minerals, such as basalt.	Low-grade regional metamorphism.
2. Slate	Mudrock (shale, mudstone)	Very low-grade regional metamorphism
3. Mica-garnet schist	A rock that is rich in aluminum, which includes most clay-bearing rocks.	Medium-grade regional metamorphism
4. Amphibolite	A rock enriched in ferromagnesian minerals, such as basalt.	Medium- to high-grade regional metamorphism.
5. Marble	Limestone or dolomite	Regional or contact metamorphism.

Chapter 8

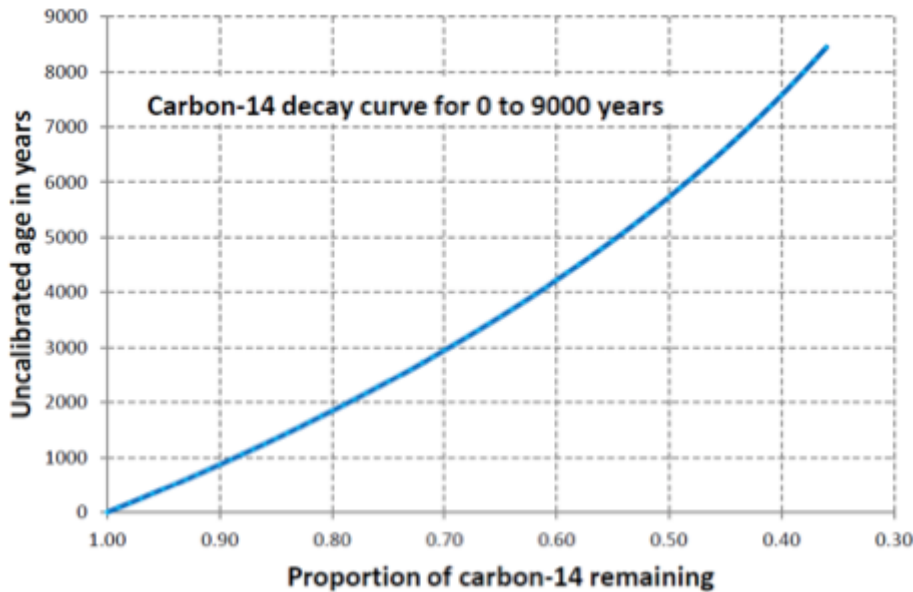
1. Xenoliths of basalt within a granite must be older than the granite according to the principle of inclusions.
 1. At both disconformities and paraconformities the beds above and below are parallel, but at a disconformity there is clear evidence of an erosion surface (the lower layers have been eroded).
 2. A nonconformity is a boundary between sedimentary rocks above and non-sedimentary rocks below while an angular unconformity is a boundary between sedimentary rocks above and tilted and eroded and sedimentary layers below.
2. A useful index fossil must have survived for a relatively short period (e.g., around a million

years), and also should have a wide distribution so that it can be used to correlate rocks from different regions.

3. The granitic rock “f” has been dated to 175 Ma. The wood in layer “d” is approximately 5,000 years old, so we can assume that layer “d” is no older than that, although it could be as much as a few hundred years younger if the wood was already old when it got incorporated



into the rock.

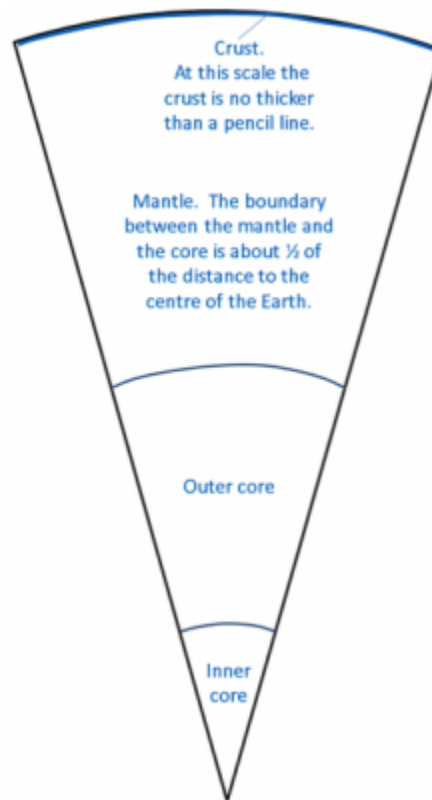


4. Layer “c” must be between 5,000 y and 275 Ma.
5. The unconformity between layer “c” and rock “f” is a nonconformity.
6. The granite (f) was eroded prior to deposition of “c”, so it’s likely that layer “b” was also eroded at the same time. If so, that makes the boundary between “c” and “b” a disconformity.
7. The last magnetic reversal was 780,000 years ago, so all rock formed since that time is normally magnetized and it isn’t possible to distinguish older rock from younger rock within that time period using magnetic data.

8. William Smith was familiar with the different diagnostic fossils of the rocks of England and Wales and was able to use them to identify rocks of different ages.
9. The last age of the Cretaceous is the Maastrichtian (70.6 to 65.5 Ma) and the first age of the Paleogene is the Danian (65.5 to 61.7 Ma).

Chapter 9

1. Typical stony meteorites are similar in composition to the Earth's mantle, while typical iron meteorites are similar to the core.
2. The crust/mantle, mantle/core, outer core/inner core are shown on the diagram below:



The crust is the thin outer layer. The Mantle reaches half way towards the centre of the earth from the crust. Then comes the outer core and the inner core.

3. P-waves can pass through a liquid and travel approximately twice as fast as S-waves (which cannot pass through a liquid).
4. P-wave velocity decreases at the core-mantle boundary because the outer core is liquid.
5. The mantle gets increasingly dense and strong with depth because of the increasing pressure. This difference affects both P-wave and S-wave velocities, and they are refracted toward the lower density mantle material (meaning they are bent out toward Earth's surface).
6. The key evidence for mantle convection is that the rate of temperature increase within the

mantle is less than expected and this can only be explained by a mantle that is mixing by convection. The mechanism for convection is the transfer of heat from the core to the mantle.

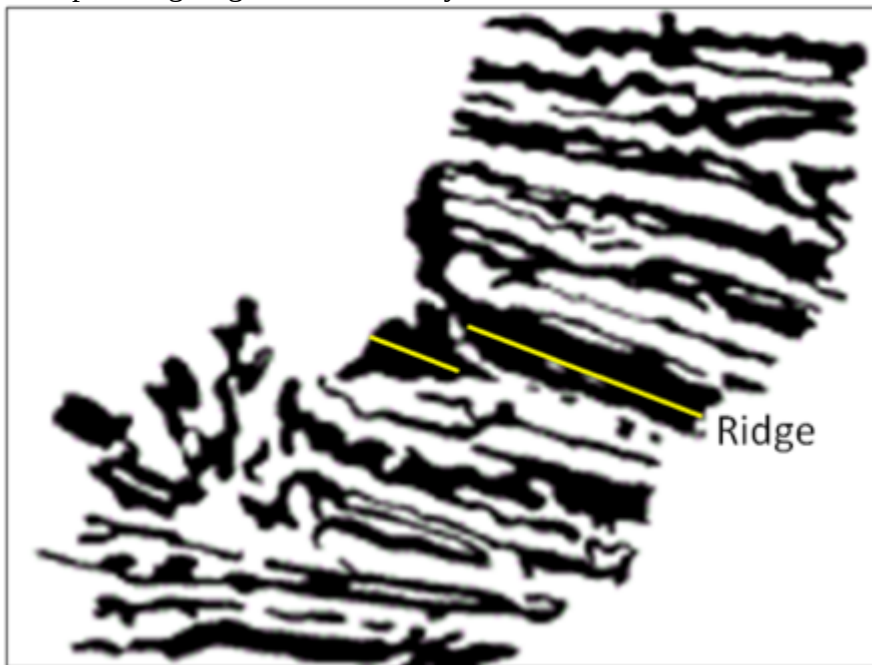
7. Earth's magnetic field is generated within the liquid outer part of the core by the motion of the metallic core material.
8. The last two reversals of Earth's magnetic field were at the beginning of the present Brunhes normal chron (0.78 Ma), and at the end of the Jaramillo normal subchron (0.90 Ma).
9. The isostatic relationship between the crust and the mantle is dependent on the plastic nature of the mantle.
10. In the area of the Rocky Mountains the crust is thickened and pushed down into the mantle. In Saskatchewan the crust is thinner and does not extend as far into the mantle.
11. During the Pleistocene glaciation British Columbia was pushed down by glacial ice and mantle rock flowed slowly out beneath the ocean floor. Now that the land area is rebounding, that mantle rock is flowing back and the offshore areas are subsiding.

Chapter 10

1. The evidence used by Wegener to support his idea of moving continents included matching continental shapes and geological features on either side of the Atlantic; common terrestrial fossils in South America, Africa, Australia, and India; and data on the rate of separation between Greenland and Europe.
2. The primary technical weakness of Wegener's theory was that he had no realistic mechanism for making continents move.
 1. Contractionists assumed that mountains formed because as the Earth contracted the crust wrinkled into mountains.
 2. Permanentists assumed that mountains formed by the geosynclinal process.
3. In the late 19th century the trans-Atlantic paleontological matchups were explained by assuming that there must have been land bridges between the continents at some time in the past, or that terrestrial organisms had floated across the ocean on logs.
4. Continental crust is lighter than oceanic crust and cannot sink low enough into the mantle to become an ocean (although this can happen over limited areas, and commonly does happen along coastal areas of continental plates).
5. Prior to 1920, ocean depths were measured by dropping a weighted line over the side of ship. Echo sounding techniques were developed at around that time and that greatly facilitated the measurement of ocean depths.
6. Temperature increases quite rapidly with depth in the crust, but much less so in the mantle, and this implies mantle convection.
7. Paleomagnetic studies showed that old rocks on the continents had different pole positions than they do today, and also that they were progressively more different with time past. This implied either that the poles had moved or that the continents had moved. It was also found that the apparent polar wandering paths for different continents were different, and this

supported the concept that the continents had moved.

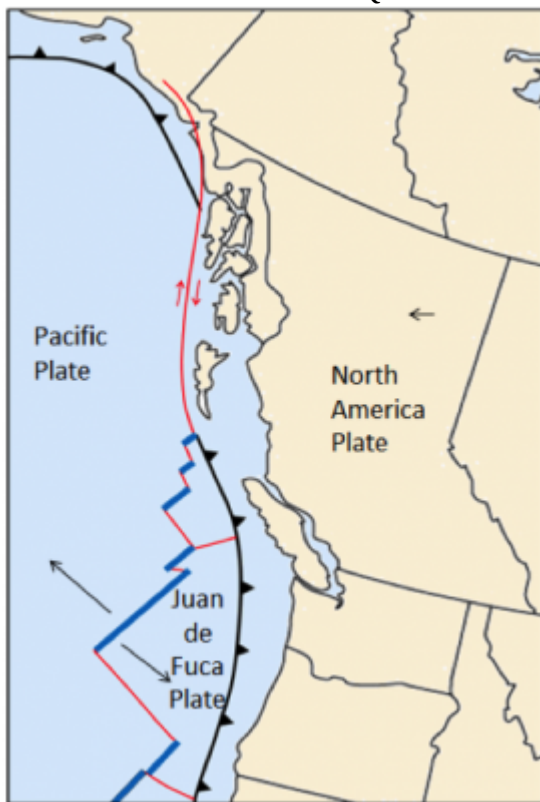
8. The trenches associated with subductions zones are the deepest parts of the oceans.
9. The ocean ridge areas are the youngest parts of the sea floor and thus there hasn't been time for much sediment to accumulate.
10. It was (and still is) assumed that high heat flow exists where mantle convection cells are moving hot rock from the lower mantle toward the surface, and that low heat flow exists where there is downward movement of mantle rock.
11. Earthquakes are consistently shallow and relatively small at ocean ridges. At ocean trenches earthquakes get increasingly deep in the direction that the subducting plate is moving. The earthquakes near to surface can be very large, while those at depth tend to be small.
12. In the Hess model new crust was formed at ocean ridges and then was consumed back into the mantle at the trenches.
13. Hess's theory did not include the concept of tectonic plates.
14. The spreading ridge is shown as a yellow line.



15. A mantle plume is a column of hot rock (not magma) that ascends toward the surface from the lower mantle. It is hypothesized that mantle plumes ascend as much as 10 times faster than the rate of mantle convection.
 1. Between the ridge segments there is movement in opposite directions along a transform fault.
 2. Outside of the ridge segments the two plates are moving in the same direction and likely at about the same rate. In this case there is no faulting, and it is known as a fracture zone.
16. Tectonic plates are made up of crust and the lithospheric (rigid) part of the underlying mantle. The mantle part ensures that the very different oceanic and continental crust sections of a

plate can act as one unit.

17. A mantle plume beneath a continent can cause the crust to form a dome which might eventually split open. Several mantle plumes along a line within a continent could lead to rifting.
18. Subduction does not take place at a continent-continent convergent zone because neither plate is dense enough to sink into the mantle.
19. The divergent boundaries are blue, the convergent boundaries are black with teeth on them, and the transform boundaries are red.
20. The motion directions are shown with black arrows (see map for names of plates).
21. The sense of motion on the Queen Charlotte Fault is shown with red arrows.



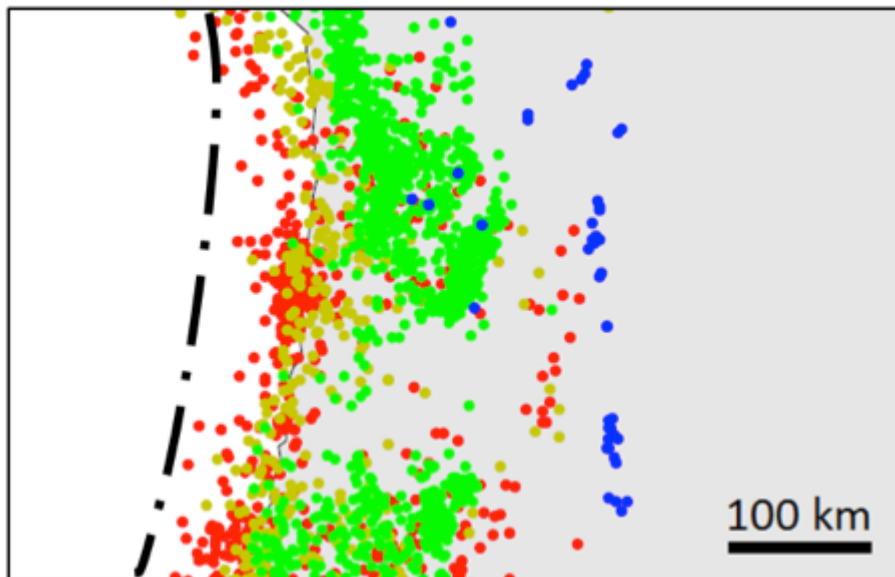
22. Continental rifting is taking place along the East Africa Rift, and sea floor has recently been created in the Red Sea and also in the Gulf of California.
23. Over the next 50 million years California is likely to split away from the rest of North America along the San Andreas Fault and then move north toward Alaska.
24. The accumulation of sediment at a passive ocean-continent boundary will lead to the depression of the lithosphere and could eventually result in the separation of the oceanic and continental parts of the plate and the beginning of subduction.

Chapter 11

1. An earthquake is the shaking caused by the release of energy that takes place when rocks

under stress within Earth break and then the two sides slide past each other.

2. Rocks under stress will deform elastically until they reach the point where the stored elastic energy exceeds the rock strength. At that point the rock breaks and an earthquake is produced.
3. The rupture surface is the surface over which there is displacement of rock during an earthquake. The magnitude of an earthquake is proportional to the area of the rupture surface and the average amount of displacement over that surface.
4. An aftershock is any earthquake that is considered to have been caused by a previous earthquake as a result of the transfer of stress from the original earthquake.
5. Episodic slip on the middle part of the Cascadia subduction zone decreases stress within that area, but some of that stress is transferred to the locked zone up dip along the plate boundary, there increasing the level of stress on the locked part.
6. Magnitude is the amount of energy released by an earthquake. Each earthquake has only one magnitude, although there are different ways of measuring it, and they may give slightly different results. Intensity is a measure of the amount of damage done or what people felt. Intensity varies depending on the distance to the epicentre and the type of rock or sediment underlying an area.
7. An M7.3 earthquake releases 1,024 times as much energy as an M5.3 earthquake.
8. The map shows a subduction boundary. The depth of earthquakes increases inshore (to the east) from the location of the subduction zone.
9. The dash-dot line shows approximately where the plate boundary is situated.



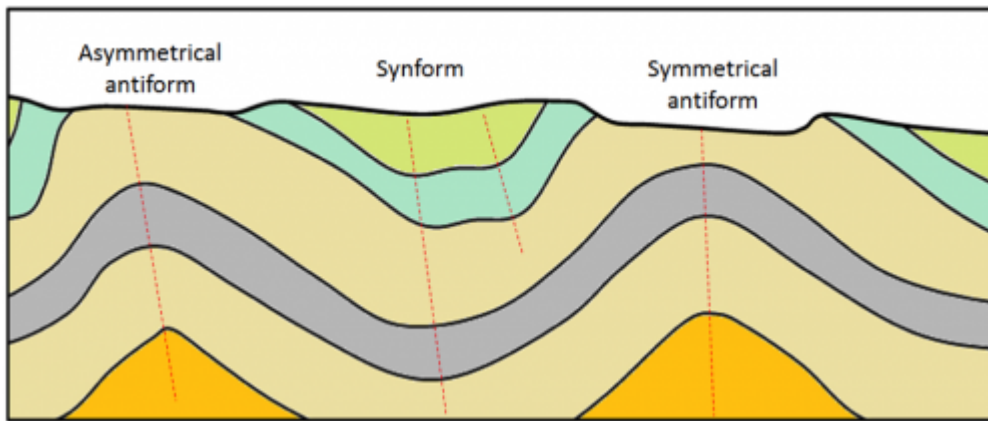
10. The plate on the left (Nazca Plate) is moving east and the one on the right (South America Plate) is moving west. This is the eastern coast of South America around Peru and Chile.
11. Both divergent and transform boundaries are associated with mid-ocean ridges. Most earthquakes take place on the transform boundaries.
12. The northward motion of the Pacific Plate relative to the North America Plate takes place

along the San Andreas Fault in California and along the Queen Charlotte Fault off the coast of British Columbia and southern Alaska.

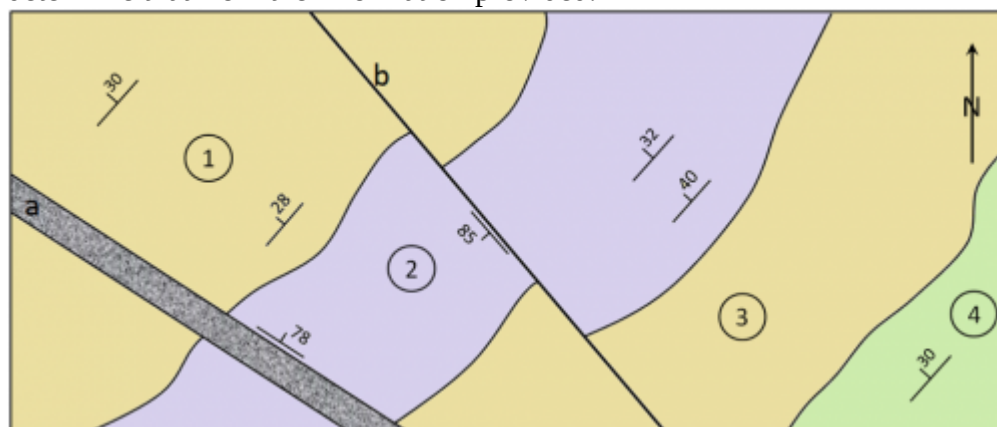
13. Unconsolidated sediments, especially if they are saturated with water, can lose strength when subjected to earthquake shaking. This can cause buildings to subside or tilt. Unconsolidated sediments can also amplify the vibrations of an earthquake.
14. Gas lines and electrical transmission wires are typically damaged during an earthquake, and this can lead to serious fires.
15. A large subduction earthquake (greater than M7.5) can generate a tsunami because they typically result in vertical displacement of the sea floor.
16. The 2004 Parkfield earthquake showed that we cannot rely on foreshocks to predict earthquakes, or on any of the many other parameters that were being carefully measured around Parkfield in the years leading up to the quake.
17. We should know about the history of past large earthquakes, the typical locations of small earthquakes, the types of geological materials beneath the surface (especially soft water-saturated sediments), the types of infrastructure that is present, and the various ways that people can be evacuated from an area or assistance can be brought in.
18. Forecasting involves estimating the risk of an earthquake happening in a region within a period of time (usually expressed in decades). Prediction involves stating that an earthquake is likely to happen at a certain location on a specific day or month or year in the future. With our current state of knowledge of earthquakes, prediction is not possible.

Chapter 12

1. Convergent plate boundaries are the most likely to contribute to compression, divergent boundaries to extension, and transform boundaries to shearing, however all of these stress regimes can exist at any one of these boundaries.
2. When elastic strain takes place the rock can rebound to its original shape. When there is plastic strain the rock will be permanently deformed.
3. Stronger rocks are more likely than weaker ones to deform elastically. Rock that is hot is more likely to deform plastically. Clay-bearing rocks are more likely to deform plastically when they are wet. If stress is applied quickly, the rock is more likely to break than if it is applied slowly.
4. The axial planes are shown with dashed red lines.



5. Volcanic rocks cool quickly at surface and the resulting reduction in volume can easily lead to fracturing.
6. In a normal fault the rock above the fault moves down with respect to the lower rock. This normally indicates extension. In a reverse fault the rock above the fault is pushed up, which indicates compression.
7. Most faults near transform boundaries are strike-slip faults, meaning that there is horizontal motion along the fault.
 1. The beds are dipping at about 30° to the northwest.
 2. If it is possible to show that the beds are not overturned then we can say that bed 4 is the oldest.
 3. "a" is a dyke and it is dipping steeply to the northeast.
 4. "b" is a fault and it is dipping steeply to the southeast.
 5. The motion on fault "b" appears to be left lateral. There may also be some vertical motion on "b" (or in fact the motion may be entirely vertical), but we cannot determine that from the information provided.



Chapter 13

1. Approximately 1% of the Earth's water is liquid fresh water.

2. Approximately 30% of the Earth's fresh water is groundwater.
3. A trellis drainage pattern typically forms on sedimentary rock that has been tilted and eroded
4. Many of the streams in the southwestern part of Vancouver Island flow to the ocean as waterfalls because the land has been uplifted relative to sea level over the past several thousand years.
5. The fastest water flow on a straight stretch of a stream will be in the middle of the stream near the surface.
6. 1 millimetre sand grains will be eroded if the velocity is over 20 centimetres per second and will be kept in suspension as long as the velocity is over 10 centimetres per second.
7. If the flow velocity is 1 centimetre per second, particles less than 0.1 millimetres (fine sand or finer) can be transported, while those larger than 0.1 millimetres cannot. At this velocity no particles can be eroded.
8. A braided stream can develop where there is more sediment available than can be carried in the amount of water present at the rate at which that water is flowing. This may happen where the gradient drops suddenly, or where there is a dramatic increase in the amount of sediment available (e.g., following an explosive volcanic eruption).
9. If a meander is cut off it reduces the length of a stream so it increases the gradient.
10. The average gradient of the Fraser River between Hope and the Pacific Ocean is 0.28 metres per kilometre (or 28 centimetres per kilometre).
11. In coastal regions of B.C. the highest levels of precipitation are in the winter, and large parts of most drainage basins are not frozen solid. As a result stream discharges tend to be greatest in the winter.
12. In most parts of Canada winter precipitation is locked up in snow until the melt season begins, and depending on the year and the location that happens in late spring or early summer. If the thaw is delayed because of a cold spring, and then happens very quickly, flooding is likely. Some regions also receive heavy rainfall during this period of the year.
13. $R_i = (n+1) \div r$ (where n is the length of the record) and r is the rank of the flood in question. In the Ashnola River case $R_i = (65+1) \div 2 = 33$. The probability of such a flood next year is $1/R_i$, or $1/33$ which is 0.03 or 3%.

Chapter 14

1. Porosity is the proportion of open space (space that can be filled with water), within a rock or unconsolidated sediment. Permeability is an expression of the ease with which water will flow through that material.
2. Clay deposits have low permeability because of the small size of the clay fragments. Water is tightly held to the grains by surface tension, and in the very small spaces between grains in clay there is virtually no water that is not able to flow.
3. From least to most permeable: unfractured gneiss, mudstone, sandstone, fractured granite, limestone in a karst region.

4.
 - Sue's well accesses an unconfined aquifer with low permeability.
 - Frank's well accesses a confined aquifer with high permeability.
 - Sue's low capacity aquifer acts as a (leaky) confining layer to Frank's high capacity aquifer.

5. $V = (Ki)/n$
 i = the gradient which is the elevation difference (83 – 77 = 6 metres) over the distance (70 metres) = 0.09, n is the porosity, therefore $V = (0.003 * 0.09)/0.2 = 0.00135$ metres per second.

6. After a drop of 9 metres (from 83 to 74 metres), and assuming that the other well did not drop at all, the gradient direction will have changed and the groundwater should flow toward the well that now has a level of 74 metres.

7. Governments have the responsibility to protect our resources and to do their best to make sure that individuals and industry can access the groundwater that they need. Without observation well networks governments will have no independent information on how water levels are changing, and will be unable to make decisions on what might need to be done to ensure an adequate water supply for all.

8. Natural groundwater contamination originates from the natural reactions between the groundwater and the aquifer minerals. Anthropogenic groundwater contamination typically comes from human-sourced chemicals at or near to surface that are allowed to leak into the aquifer.

9. Water travels faster through a highly permeable aquifer and thus can spread the contamination further than in a less permeable one.

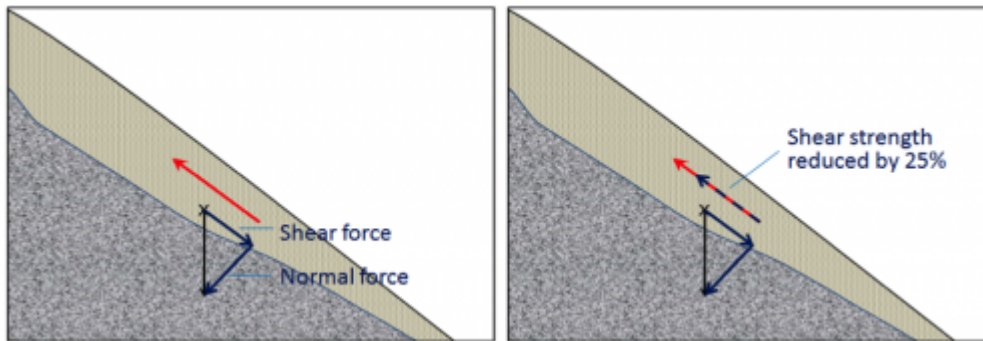
10. Livestock wastes are rich in nitrogen compounds, and these most commonly lead to nitrate contamination within the groundwater. Livestock wastes may also contain pharmaceuticals, which could contaminate groundwater.

11. The mineral pyrite is most likely to be responsible for acid rock drainage.

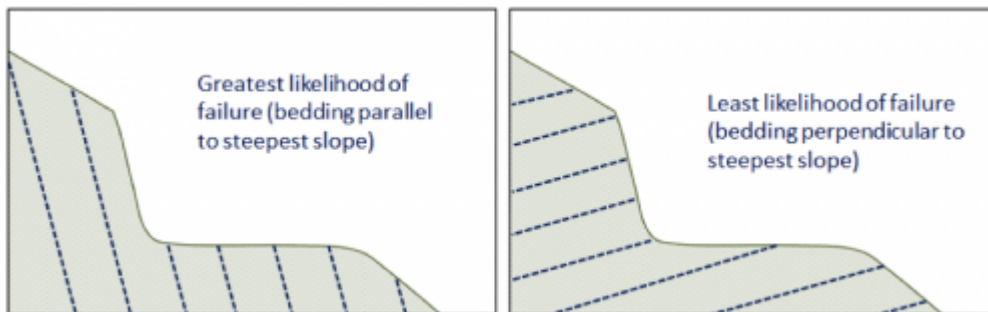
12. The waste water in a septic field needs to percolate slowly through the ground in order for natural processes to break down the contaminants. If the permeability is too low the waste water could come to surface. If the permeability is too high it could contaminate groundwater.

[Chapter 15](#)

1. The shear force and normal force vectors are shown on the left-hand diagram:



2. Based on the relative lengths of the arrows it appears that this material is stable, and unlikely to fail.
3. If the shear strength was reduced by 25% (right-hand diagram) the material would be much closer to failure, but the strength (based on the length of the arrows) still appears to be greater than the shear force.



4. In moist sand the grains are each surrounded by an envelope of water, and the water envelopes overlap. The attractive surface tension of the water holds the grains together.
5. In a the material moves like a fluid (individual particles move independently). In a the mass moves as an intact unit, with little or no relative motion between grains or clasts.
6. If a large rock slide starts moving at a rate of several metres per second, the rock is very likely to break into smaller pieces. If the pieces are small and numerous enough that the material can flow, then it becomes a rock avalanche.
7. A debris flow is composed mostly of sand-sized and larger clasts, while a mudflow is composed mostly of sand-sized and smaller clasts.
8. Residents at risk from Mt. Rainier lahars need to know what the warnings mean and roughly how much time they have between receiving a warning and being in actual danger. They need to create a plan to exit their residence quickly, and they need to know which way to go to get to safety as efficiently as possible.
9. Some of the important factors include:
 - The steepness of the slope
 - Any existing erosion processes happening at the base of the slope (e.g., wave or stream erosion)
 - The nature of surface or shallow sub-surface drainage in the upper part of the slope, and any effects that the construction might have on the drainage

- The weight of the building (unless it is to be constructed in an excavation that represents more mass than the building itself)

Chapter 16

1. The Cryogenian glaciations are called Snowball Earth because it is thought that freezing conditions affected the entire planet and that the oceans were frozen over, even at the equator.
2. The cooling from the end of the Paleocene until the Holocene was related to the formation of mountains including the Himalayas, the Rockies, and the Andes; the opening of the Drake Passage; the development of Antarctic Circumpolar Current; and the closing of the Isthmus of Panama.
3. The first glaciation of the Cenozoic took place in Antarctica during the Oligocene (around 30 Ma).
4. At the height of the last glaciation, the Laurentide Ice Sheet covered almost all of Canada and extended south into the United States as far as Wisconsin.
5. Continental glaciers flow from the areas where the ice is thickest (and therefore at the highest elevation) toward areas (at the margins) where the ice is thinnest. Ice thickness tends to be related to the rate of ice accumulation.
6. The equilibrium line represents the boundary between the area where ice is accumulating (typically at high elevations), and where it is being depleted (mostly by melting). Above the equilibrium line more snow accumulates in winter than can melt in summer so the glacier is always covered in snow. Below the equilibrium line the snow cover is lost by the end of summer.
7. Relatively cool summers are more important because that controls how much snow will melt in the summer. In many situations very cold winters are associated with less snow accumulation than just cold winters.
8.
 1. The ice at the bottom of a glacier flows more slowly than that at the top. In fact if the glacier is frozen to its base the lowermost ice might not be moving at all.
 2. The edges also flow more slowly than the middle because there is more friction there between the ice and the valley walls.
9. Basal sliding will take place when the bed of the glacier is warm enough for water to be liquid. The water will act as a lubricant to allow the ice to flow.
10. Glaciers carve U-shaped valleys because they are relatively wide (compared with rivers) and most of the erosion takes place at the base rather than the sides. A hanging valley forms where a tributary glacier joins a larger glacier and where the larger glacier has eroded a deeper valley.
11. There must be at least three cirques to form a horn. In most cases there wouldn't be room for more than four.
12. A drumlin is relatively steep at the up-ice end and streamlined at the down-ice end. A roche moutonnée is streamlined at the up-ice end and jagged at the down-ice end where plucking has


taken place.

Poorly sorted, clay to boulders, no layering, large clasts not well rounded, no structures.	Bedded, some fine beds (sand) and some much coarser. Clasts are relatively well rounded	Poorly sorted, pebbles to boulders, no layering, large angular clasts, no apparent structures.	Sand- and silt-sized. Well sorted. Bedded and cross bedded.
			
Lodgement till	Glaciofluvial sand & gravel	Ablation till	Glaciofluvial sand

- 13.
14. Drop stones are large clasts that are present with lacustrine or marine glacial sediments. They form when coarse material drops from melting icebergs.
15. Glaciofluvial sediments (sand or sand and gravel) are likely to be sufficiently permeable to make good aquifers.

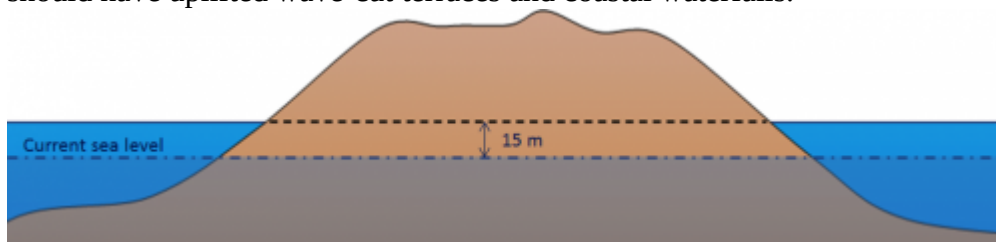
Chapter 17

1. The size of waves are determined by the wind velocity, the length of time the wind blows in the approximately the same direction, and the area of water over which it blows.
2. Table 17.1 provides data for 56 and 74 kilometres an hour winds, and 65 kilometres an hour is half way between these two values. The listed values for duration and fetch are high enough for the sea to fully develop, so the simple answer would be that the wave amplitude and wavelength would also be approximately half way between the listed values: amplitude around 6 metres, wavelength around 106 metres.
3. Waves will start to feel” the bottom at around 50% of the wavelength, so at a 50 metre depth in this case. This will slow the waves down and also cause their amplitude to increase.
4. A longshore current is the movement of water parallel to the shore in the surface zone caused by waves approaching at an angle. Longshore drift is the movement of sediment parallel to the shoreline, caused partly by the longshore current and also by swash and backwash on the beach.
5. Wave energy is focused on the headland, with more wave energy vectors per length of coast than in the bays, and thus the headland is eroding faster than the bays on either side, leading



to coastal straightening.

6. Rocky coasts are eroded by waves and that erosion is greatest within the surface zone. As stacks and arches are eventually eroded away, a wave-cut platform is left.
7. The beach face is the relatively steep area of the beach between the low and high tide levels. This is also known as the foreshore or swash zone.
8. A spit can form where there is longshore drift and the geometry of the shoreline is such that a sand bar extends away from the shore.
9. The area of the Atlantic coast north of Massachusetts (including New Hampshire, Maine, New Brunswick, Nova Scotia, and Newfoundland plus all of the area inland) was glaciated during the Pleistocene and has since rebounded isostatically. This is all now relatively young rocky coast that is being actively eroded.
10. There has been approximately 125 metres of eustatic sea-level rise since the last deglaciation, so the current sea level should be approximately $140 - 125 = 15$ metres lower than it was during glaciation. The dash-dot line marks present-day sea level. An uplifted coast like this should have uplifted wave-cut terraces and coastal waterfalls.



11. Sediments would be trapped in the reservoir behind such a dam, and the water flowing through the dam would be sediment-free. Although there would be erosion of new sediments downstream from the dam, the water reaching the ocean at Richmond would have less sediment than it does now. This is likely to result in the beaches around Vancouver being starved of sediment, and they would gradually get smaller.

Chapter 18

1. Most of the sediments on continental shelves originate from clastic sediments derived from erosion on the continents. The shelves on the eastern coast of North America are wider than those along the west coast because there has been relatively recent (Cenozoic) tectonic activity on the west coast, while the east coast has been passive for about 180 million years.
2. Subduction zone trenches may be partly filled in areas where there is significant sediment input from rivers.
3. From bottom to top, oceanic crust is composed of gabbro, sheeted mafic dykes, and pillow basalts. In most areas it is also covered with varying amounts of sea-floor sediments and sedimentary rocks.
4. The oldest sea floor in the Indian Ocean is in the order of 150 Ma. There is oceanic crust of this age along the western margin of Africa, and adjacent to the northwestern part of Australia.
5. Coarse terrigenous sediments accumulate mostly where major rivers enter the sea, but they are only washed a few kilometres out to sea (at most) because there isn't enough river velocity left to move them farther. Some of those sediments are moved many kilometres farther out to sea during flows of turbidity currents. Clay, on the other hand, can stay in suspension for centuries, and during that time can be dispersed well out into the ocean.
6. Carbonate sediments will accumulate on the sea floor wherever there is significant abundance of carbonate-shelled organisms near to surface, and where the ocean is shallower than the depth at which carbonate becomes soluble (the carbonate compensation depth). In these areas there is typically much more carbonate than clay present, so the sediments look carbonate-rich, even though there is clay there.
7. Carbonate sediments are absent from the deepest parts of the oceans because carbonate minerals are soluble below about a 4,000 metre depth, so carbonate fragments that settle to that depth dissolve back into the water.
8. The carbon in sea-floor methane hydrates is derived from the bacterial breakdown of organic matter at greater depth in the sediment pile.
9. The tropical parts of the oceans are saltiest because the rate of evaporation is highest. The Mediterranean and Red Seas are saltier than the open ocean.
10. Salty water is transported north by the Gulf Stream and gradually cools. As it cools it remains relatively salty and this cool salty is denser than either cold very fresh water or warm very salty water.
11. The relatively dense water in the north Atlantic sinks to become North Atlantic Deep Water (NADW), and gradually moves back towards the south.
12. The open-ocean currents have the effect of moderating Earth's surface temperature because warm tropical water is moved toward the poles, and cold polar water is moved toward the tropics.

Chapter 19

1. The greenhouse gases (GHG) vibrate at frequencies that are similar to those of infrared (IR) radiation. When IR radiation impinges on a GHG molecule, the molecule's vibrational energy is enhanced and the radiation energy is converted into heat, which is trapped within the atmosphere.
2. The combustion of fossil fuels releases CO₂ that was previously stored in the crust. The resulting increase in atmospheric CO₂ leads to a temperature increase. As the temperature increases, the solubility of CO₂ in the ocean decreases and additional CO₂ is released by the ocean, resulting in even higher atmospheric CO₂ levels and higher temperatures.
3. Gondwana was situated over the South Pole for much of the Paleozoic and became glaciated during the Ordovician (Andean-Saharan Glaciation) and again during the Permian (Karoo Glaciation). These glaciations cooled the entire planet during these periods.
4. From a climate perspective, the two important volcanic gases are SO₂ and CO₂. SO₂ is converted to sulphate aerosols which block sunlight and can lead to short-term cooling (years). CO₂ can lead to warming, but only in situations where there is an elevated level of volcanism over at least thousands of years.
5. We use 65° for estimating the glaciation potential of orbital variations because glaciers are most likely to form at high latitudes. We use 65° N rather than 65° S because for more than 50 million years the continents have been concentrated in the northern hemisphere. We use July instead of January because for glaciers to grow it's more important to have cool summers than cold winters.
6. If the major currents in the oceans were to slow down or stop, the tropics would get hotter and the high-latitude areas would get colder, leading to expansion of glaciers and sea ice. The various feedbacks (e.g., higher albedo because of increased ice cover) would result in an overall cooler climate.
7. The main climate implication of the melting and breakdown of permafrost is that carbon that was trapped in the frozen ground will be released and then converted to CO₂ and CH₄, leading to more warming.
8. Sea-floor methane hydrates are stable because the deep ocean water is cold. In order for the hydrates to become unstable, warmth from the upper layers of the ocean has to be transferred to depth.
9. A significant part of our GHG emissions take place during because of the (formerly) intentional and (presently) unavoidable release of natural gas (CH₄) during the extraction of oil and gas. Some is lost during transportation — for example when pipelines leak — and some is consumed during transportation — for example to pressurize pipelines or to power tanker trains. GHGs are also leaked to the atmosphere during the routine refuelling and operation of motor vehicles.
10. The rise of sea level results from a combination of melting glaciers and thermal expansion of the ocean water. Both of these large systems are slow to respond to the warming climate. For example it takes a long time for warm surface water to be transferred to depth in the ocean or for heat to be transferred to depth in a glacier. Even if we stabilized the GHG levels in the

atmosphere today, the climate would continue to warm for approximately another 100 years, and sea level would continue to rise for much longer than that.

11. West Nile virus is carried by birds and is transmitted to humans by certain species of mosquitoes. The range and abundance of those mosquitoes is partly controlled by climate change, especially by warm winters. Sufficiently warm winters are increasingly common in the northern United States and southern Canada.

Chapter 20

1. Some of the components of a compact fluorescent lightbulb (and the resources used to make one) are as follows:
 - Steel (iron, carbon from coal plus some manganese, nickel, chromium, molybdenum)
 - Plastic housing (petroleum)
 - Glass coil (silica from sand, plus minor amounts of sodium, calcium, and magnesium)
 - Copper conductors, lead solder, and basal contact
 - Silica (sand), plastics (petroleum), ceramics (clay), aluminum, gold, copper, etc. in the electronics
 - Mercury inside the tube (less than 5 milligrams)
2. Nickel deposits form within mafic and ultramafic igneous bodies because the original magma have relatively high nickel levels to begin with, while intermediate or felsic magma have low levels.
3. The “smoke” in a black smoker is composed of tiny crystals of sulphide minerals. If those include significant quantities of ore minerals like chalcopyrite (CuFeS_2), sphalerite (ZnS), and galena (PbS), a VMS deposit could form during this process.
4. A porphyry deposit is situated in the rock around an igneous pluton that has intruded to a relatively high level in the crust (and hence is porphyritic), and they form at least in part from fluids released by the magma. Epigenetic gold deposits may be formed from the same or similar fluids, but are situated at a greater distance from the pluton/
5. Ferrous iron (Fe^{2+}) is soluble in water with a low oxidation potential, and gets converted to insoluble ferric iron (Fe^{3+}) when the water becomes oxidized. The opposite situation happens with uranium. Uranyl uranium (U^{6+}) is soluble under oxidizing conditions, but when the water in which it is dissolved encounters reducing conditions the uranium is converted to the insoluble uranous ion (U^{4+}).
6. It is common for the upper part of a kimberlite to be mined using an open pit (in this case around 500 metres wide and up to 500 metres deep), and for the lower part to be mined underground.
7. Pyrite (FeS_2) is typically responsible for acid rock drainage around mine sites, and it is very

common for pyrite to form within the rock at the same time that other metal sulphides (e.g., chalcopyrite) are forming.

8. Glaciofluvial gravels are typically relatively well sorted, and may include clasts ranging in size from coarse sand to pebbles. Till, on the other hand, tends to be poorly sorted and may have clasts ranging from clay to boulders. More processing would be needed to separate the required size ranges, and because till tends to be relatively hard and strong, this would require a lot of effort.
9. During the manufacture of CaO limestone is heated and CO₂ is released to the atmosphere, adding to the greenhouse effect. The energy required for this process typically comes from fossil fuels (e.g., natural gas) and the combustion also releases CO₂.
10. Some important evaporite minerals include halite (NaCl), sylvite (KCl), and gypsum (CaSO₄·2H₂O).
11. The 15 metres of organic matter required to make 1.5 metres of coal, is equivalent to 15,000 millimetres, and if the organic matter accumulates at 1 millimetre per year that would require 15,000 years. That organic matter would have to remain submerged in oxygen-poor water for at least that length of time.
12. Petroleum source rocks must have a significant component of organic matter, and then need to be buried to at least 2,500 metres depth so that the organic matter can be converted to oil or gas. Reservoir rocks must be both porous and permeable, so that the petroleum liquids can be extracted, and should also take the form of a trap (e.g., an anticline) and capped with impermeable rock.
13. The optimum depth for the generation of oil from buried organic matter is 2,500 to 3,500 metres.
14. Shale gas is an unconventional reserve because shale is not permeable enough to allow the gas to be extracted. The rock has to be fractured (fracked) to allow recovery. Fracking involves the use of vast amounts of water, and there is the potential that the fracking fluids can contaminate freshwater aquifers.
15. Kimberlite indicator minerals are much more abundant than diamonds within kimberlites, and so they can typically be detected further away from the kimberlite source, and over a much wider area.

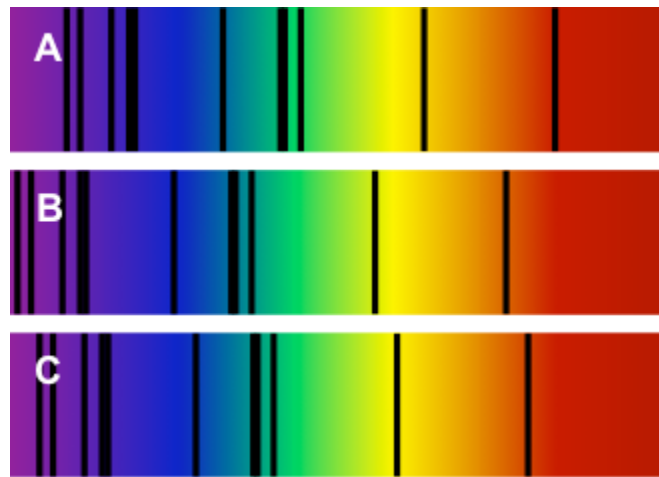
Chapter 21

1. The oldest parts of Laurentia are the Slave and Superior Provinces. Both have rocks that are in the order of 4 Ga.
2. The regions A through E are A-the Cordilleran Fold Belt, B-the Western Canada Sedimentary Basin, C-the Canadian Shield, D-the Innuitian Fold Belt, and E-the Appalachian Fold Belt.
3. Pearya collided with North America to form the Innuitian fold belt during the Devonian.
4. The ancient sedimentary rocks of the Athabasca and Thelon Basins were deposited on the stable Canadian Shield and were never involved in tectonic processes; nor were they buried deeply enough to be metamorphosed.

5. Ultramafic magma has to be very hot to be liquid, and while Earth's interior was hot enough during the Archean, it is no longer hot enough.
6. There are several reasons why the preservation is so good in the Burgess Shale: the rock is very fine grained so details are well defined; the dead organisms accumulated in a lifeless anoxic basin so they were not oxidized, scavenged, or broken down by bacteria while they were being fossilized; although some of the surrounding rocks are weakly metamorphosed, the Burgess Shale was protected from squeezing by adjacent strong limestone.
7. The Western Canada Sedimentary Basin was filled with marine water during pre-Prairie Evaporite times and Winnipegosis carbonate was deposited. It slowly dried out to produce the evaporite beds, but was later re-filled, leading to the deposition of Dawson Bay carbonate. The isolation of the basin during Prairie Evaporite times might have been due to a drop in sea level or tectonic uplift. A change to a dryer climate may also have been a factor.
8. The rocks of the Intermontane Superterrane have fossils that are indicative of southern hemisphere deposition, and also have magnetic inclinations that imply an origin south of the equator.
9. Terrane accretion on the west coast led to formation of the Rocky Mountains. The rapid erosion of these mountains provided a source for accumulation of sediments within the WCSB.
10. The western edge of the WCSB was pushed down by the mass of the Rocky Mountains toward the end of the Mesozoic, and thus can be thought of as a foreland basin.
11. The likely order is Yukon-Tanana, Quesnel, Cache Creek, and Stikine, although it is also possible that these terranes were assembled as one unit prior to reaching North America.
12. Nanaimo Group sedimentary rocks were forced inland and up to relatively high elevations on Vancouver Island when the accretion of the Pacific Rim and Crescent Terranes pushed Vancouver Island closer to the mainland.
13. The Paskapoo Formation becomes thinner toward the northeast because the foreland basin gets shallower in that direction, and also because the source of the sediments is the Rocky Mountains, situated along the southeastern edge of the basin.

Chapter 22

1. To see an event, light from that event must reach our eyes. Light travels very quickly (about 300,000,000 metres per second), but the universe is very, very large. Depending on how far away the event was, it could take billions of years for light to travel from the event to our eyes so we can see it. Astronomers take advantage of this fact to view the universe's past.
2. B is the spectrum from the Andromeda galaxy. We know that one spectrum represents the Sun, which is not moving toward or away from us. (Our orbit is not perfectly circular, but the small eccentricity is not a factor in this comparison.) We know that the Andromeda galaxy is on a collision course with us, so it is the exception to the rule that galaxies are moving away from us, and their light is red-shifted. That means the spectrum B which is shifted furthest to the left (blue-shifted) is Andromeda, and spectrum A which is furthest to the right (red-shifted) is a galaxy moving away from us. That means C is the Sun.



Spectra for the sun and two galaxies. [Image by Karla Panchuk]

3. The planetary system consisted of two Jupiter-sized gas giant planets. Gas giant planets contain large amounts of hydrogen, and hydrogen was plentiful in the early universe. In contrast, terrestrial planets have heavier elements, especially silica, iron, magnesium, and nickel, that had yet to be manufactured by stars. Those elements were not present in sufficient abundance to form terrestrial planets until much later.
4. Closest to the sun we find the small, rocky, terrestrial planets with metal cores. Further out are the gas giant planets, which are the largest in the solar system. They consist mostly of hydrogen, and have cores of rock and ice. Beyond the gas giant planets are the ice giant planets, which are next largest. They have a mantle of ice (not just water ice but ammonia and methane ice), and a rocky core. Smaller objects in the solar system include rocky bodies within the asteroid belt between Mars and Jupiter, and bodies of ice and dust in the Kuiper belt and Oort cloud beyond Neptune.
5. The frost line marks the distance from the Sun beyond which temperatures were cool enough to allow ice to form. This helps to explain why the terrestrial planets are closer to the Sun, and the Jovian and ice giant planets farther away. Mineral grains could solidify and begin to accrete closer to the Sun, forming terrestrial planets, because they have higher melting points. In contrast, water vapour, methane, and ammonia had to be farther from the Sun before they could freeze and begin to accrete.
6. The objects are comets, and two places to find large numbers of comets in the solar system are the Oort cloud and the Kuiper belt. The bright dot the comets have noticed is the sun, and the adventurous comet returns displaying the consequences of the Sun's energy blasting gases and dust from its surface.
7. Planets are defined as having cleared their orbits of debris. Pluto is located within the Kuiper belt, so it shares its orbit with other objects. There are two other criteria in the definition of a planet: planets in our solar system must orbit the Sun, and they must have a spherical shape. Pluto satisfies both these criteria, but sadly the people deciding whether or not Pluto should be a planet are not amenable to a "best two out of three" compromise.
8. Differentiation is the separation of materials within a planet such that dense materials sink to the core, and lighter materials float upward. In Earth's case, the denser materials are iron and nickel, and the lighter materials are silicate minerals. In order for differentiation to happen,

the entire planet must be melted.

9. Thus far it appears that our solar system is unique compared to other planetary systems we have observed. In particular, some other planetary systems have gas giant planets very close to their star. The fact that we have terrestrial planets close to the Sun makes sense in terms of the frost line, but it does not seem to be a hard-and-fast rule in other planetary systems. Therefore, we can't conclude from Kepler-452b's position alone that it is a terrestrial planet.
10. The rules to the accretion game mean that there are many complex interactions, so even a small difference in the starting conditions or in how the game goes in the beginning could have major implications in the end. For that reason, we shouldn't expect to find a planetary system that matches ours in every minute detail. However, just because we haven't found a similar planetary system does not mean one does not exist. Our planet-finding methods are biased toward discovering large planets orbiting close to their stars, whereas our solar system has small planets close to the Sun and larger ones farther away. That doesn't mean our methods won't eventually turn up a system like ours, just that they are more likely to turn up systems that are different.


Appendix 3: Answers to Exercises

The following are suggested answers to the exercises embedded in the various chapters of Physical Geology. Answers to the chapter-end review questions are provided in [Appendix 2](#).

Chapter 1

Exercise 1.1 Find a piece of granite

Responses will vary, but your sample should look something like the one shown below. Granitic rocks are hard and strong and difficult to break. They are dominated by feldspar (this one has both white plagioclase and pink potassium feldspar), but almost all have some quartz (which looks glassy) and a few dark minerals, like the black amphibole in this one.



An example of a granitic rock [Image by Steven Earle]

Exercise 1.2 Plate motion during your lifetime

It depends where you live of course, but if you live anywhere in Canada and anywhere in the US east of the San Andreas fault, then you're on the North America Plate, and that is moving towards the west at 2 to 2.5 cm/year. So if you're around 20 years old, that plate has moved between 40 and 50 cm to the west in your lifetime.

Exercise 1.3 Using geological time notation

1. 2.75 ka is 2,750 years.
2. 0.93 Ga is 930,000,000 years or 930 million years.
3. 14.2 Ma is 14,200,000 years or 14.2 million years.

Exercise 1.4 Take a trip through geological time

1. The oxygenation of the atmosphere started at around 2.5 Ga (2500 Ma). It was a catastrophe for many organisms because they could not survive the strong oxidizing effects of free oxygen.
2. We don't really know the answer to this, but it's not very long if you include insects, and there is evidence of insect damage to some of the earliest plants.
3. Plants on land allowed for animals on land, so without land plants, we wouldn't be here.

Chapter 2

Exercise 2.1 Cations, anions and ionic bonding

Lithium (3)	Magnesium (12)	Argon (18)	Chlorine (17)	Beryllium (4)	Oxygen (8)	Sodium (11)
2 in shell one and 1 in shell two	2 in shell one, 8 in shell two and 2 in shell three	2 in shell one, 8 in shell two and 8 in shell three	2 in shell one, 8 in shell two and 7 in shell three	2 in shell one and 2 in shell two	2 in shell one and 6 in shell two	2 in shell one, 8 in shell two and 1 in shell three
It loses an electron and becomes a +1 cation	It loses two electrons and becomes a +2 cation	It is electronically stable, and does not become an ion	It gains an electron and becomes a -1 anion	It loses two electrons and becomes a +2 cation	It gains two electrons and becomes a -2 anion	It loses an electron and becomes a +1 cation

Exercise 2.2 Mineral groups

Name	Formula	Group
sphalerite	ZnS	<i>sulphide</i>
magnetite	Fe ₃ O ₄	<i>oxide</i>
pyroxene	MgSiO ₃	<i>silicate</i>
anglesite	PbSO ₄	<i>sulphate</i>
sylvite	KCl	<i>halide</i>
silver	Ag	<i>native</i>
fluorite	CaF ₂	<i>halide</i>
ilmenite	FeTiO ₃	<i>oxide</i>
siderite	FeCO ₃	<i>carbonate</i>
feldspar	KAlSi ₃ O ₈	<i>silicate</i>
sulphur	S	<i>native</i>
xenotime	YPO ₄	<i>phosphate</i>

Exercise 2.3 Make a tetrahedron

Responses will vary.

Exercise 2.4 Oxygen deprivation

Single chain silicate: 1:3 (silicon to oxygen). Double chain silicate: 7:19 (or 1:2.71)

Exercise 2.5 Ferromagnesian silicates

Mineral	Formula	Ferromagnesian Silicate?
olivine	$(\text{Mg,Fe})_2\text{SiO}_4$	yes
pyrite	FeS_2	no (it's a sulphide, not a silicate)
plagioclase	$\text{CaAl}_2\text{Si}_2\text{O}_8$	no
pyroxene	MgSiO_3	yes
hematite	Fe_2O_3	no (it's an oxide, not a silicate)
orthoclase	KAlSi_3O_8	no
quartz	SiO_2	no
amphibole	$\text{Fe}_7\text{Si}_8\text{O}_{22}(\text{OH})_2$	yes
muscovite	$\text{K}_2\text{Al}_4\text{Si}_6\text{Al}_2\text{O}_{20}(\text{OH})_4$	no
magnetite	Fe_3O_4	no (it's an oxide, not a silicate)
biotite	$\text{K}_2\text{Fe}_4\text{Al}_2\text{Si}_6\text{Al}_4\text{O}_{20}(\text{OH})_4$	yes
dolomite	$(\text{Ca,Mg})\text{CO}_3$	no (it's a carbonate, not a silicate)
garnet	$\text{Fe}_2\text{Al}_2\text{Si}_3\text{O}_{12}$	yes
serpentine	$\text{Mg}_3\text{Si}_2\text{O}_5(\text{OH})_4$	yes

Chapter 3

Exercise 3.1 Rock around the rock-cycle clock

Sedimentary rock is buried deeper to make metamorphic rock, the metamorphic rock is uplifted and during this process the material overhead is eroded so that it can be exposed at surface. The metamorphic rock is then eroded to make more sediments, which are deposited and then buried to make sedimentary rock. This would likely take at least 60 million years.

Exercise 3.2 Making magma viscous

Responses will vary.

Exercise 3.3 Rock types based on magma composition

Rock Sample	SiO ₂	Al ₂ O ₃	FeO	CaO	MgO	Na ₂ O	K ₂ O	What type of magma is it?
Rock 1	55%	17%	5%	6%	3%	4%	3%	intermediate (although the SiO ₂ level is borderline, there is too little FeO, MgO and CaO to be mafic)
Rock 2	74%	14%	3%	3%	0.5%	5%	4%	felsic
Rock 3	47%	14%	8%	10%	8%	1%	2%	mafic
Rock 4	65%	14%	4%	5%	4%	3%	3%	intermediate (although the SiO ₂ level is borderline, there is too much MgO and CaO to be felsic)

Exercise 3.4 Porphyritic minerals

1. only olivine phenocrysts
2. pyroxene and amphibole phenocrysts, along with plagioclase with a composition that is about half-way between the Ca-rich and the Na-rich end-members.

Exercise 3.5 Mineral proportions in igneous rocks

1. Roughly 25% K-feldspar, 30% quartz, 35% albitic plagioclase and 10% biotite/amphibole,
2. Roughly 65% plagioclase and 35% biotite/amphibole (most likely amphibole),
3. Roughly 45% anorthitic plagioclase, 25% amphibole and 35% pyroxene
4. Roughly 50% pyroxene and 50% olivine.

Exercise 3.6 Proportions of Ferromagnesian Silicates

The approximate proportions are: 10%, 50%, 30% and 2%, and the corresponding rock names are granite, gabbro (although it's right on the boundary between gabbro and diorite), diorite and granite.

Exercise 3.7 Pluton Problems

1. a stock
2. a dyke (it cuts across bedding and the granite)
3. a sill (it is parallel to bedding)
4. a dyke
5. a sill

Chapter 4

Exercise 4.1 How thick is the oceanic crust?

The magma available to create oceanic crust at this setting is approximately 10% of the volume of the 60 kilometres thick part of the mantle from which it is derived, so the oceanic crust should be about 6 kilometres thick.

Exercise 4.2 Under pressure

No answer possible.

Exercise 4.3 Volcanoes and subduction

The volcanoes are between 200 and 300 kilometres from the subduction boundary, about 250 kilometres on average. If the subducting crust is descending at 40 kilometres per 100 kilometres inland, the depth to the Juan de Plate beneath these volcanoes is between 80 and 120 kilometres, or 100 kilometres on average.

Exercise 4.4 Kilauea's June 27th lava flow

1. The flow front advanced at a rate of about 160 metres per day or just under 7 metres per hour between June 27th and October 29th 2014. That doesn't mean that the lava only flowed at rates of a few metres per hour over that time. It likely flowed much faster (probably 10s to 100s of metres per hour), but it advanced in fits and starts, and the advancing front changed locations many times. At other times the flow spread out across the area.
2. Between January 2015 and January 2016 the flow did not extend any further northeast towards Pahoehoe. Instead it spread out across the plain to the north of Pu'u o'o.

Exercise 4.5 Volcanic hazards in Squamish

Hazard	Risk
1. Tephra emission	Yes. However, much of the tephra from a large eruption would extend up into the atmosphere, and would not affect Squamish.
2. Gas emission	Yes. There could be dangerous amounts of sulphurous or acidic gases flowing down the mountainside into Squamish.
3. Pyroclastic density current	Yes. A pyroclastic density current that flows down the western or southwestern sides of Garibaldi could easily reach Squamish.
4. Pyroclastic fall	Yes. In the later stages of a large eruption some tephra (or pyroclastic fragments) could rain down on Squamish
5. Lahar	Yes. Squamish is definitely at risk from a lahar on the western side of the mountain. The risk would be increased if the eruption takes place in winter or spring when the amount of snow is at a maximum.
6. Sector collapse	Yes, this is possible. The western side of Mt. Garibaldi has already collapsed several times since the last glaciation.
7. Lava flow	Yes. Squamish is at risk from lava that flows on the southern and western sides of the mountain. There is a Pleistocene-aged lava flow clearly evident in the photograph. It flowed down the southern flank, and then turned west towards where Squamish is situated today.

Exercise 4.6 Volcano alert!

The most important tools for monitoring volcanoes are seismometers, and while there is a good network of seismometers in southwestern BC, there are not enough in close proximity to Mount Garibaldi to be able to accurately define the locations and depths of earthquakes around the volcano. So the first project would be to establish about 5 additional seismic stations in the Squamish region. They don't have to be right on the mountain, but can be placed near to existing roads and highways in the area. They need to be secured to bedrock. Every effort should be made to have them located on all sides of the mountain. The second project would be to establish some means of measuring deformation of the mountain itself. This could be done with tiltmeters or GPS stations, but GPS would be better. The GPS receivers have to be placed on the flanks of the mountain, and they also have to be installed right on bedrock. That could be a real challenge in winter or spring, when there is lots of snow. While this work is going on, we should charter a helicopter to fly around the mountain to see if there is any sign of eruptive activity or melting snow, and to look for convenient places to install GPS stations. We may want to land in a few different places.


There isn't a lot that we can say to the public at this stage, except that this sudden increase in seismic activity could mean that Garibaldi is getting ready to erupt, that the Geological Survey and all emergency measures organizations are working together on it, and that residents of the Squamish area, and anyone using highway 99, should keep listening to local radio stations for further updates. We could also establish a system to send out alerts via text message.

Exercise 4.7 Volcanoes down under

We would expect to see composite volcanoes on the North Island, some 200 to 300 kilometres inland (northwest) from the Kermadec Trench, and within the ocean along the same trend to the northeast of New Zealand. There is also the potential for composite volcanism to the south of the South Island, east of the Macquarrie fault zone, although there appears to be some doubt about whether subduction is actually taking place in this region.

Chapter 5

Exercise 5.1 Mechanical weathering



Examples of mechanical weathering. [Photo by Steven Earle]

Exercise 5.2 Chemical weathering

Chemical change	Process
1. Pyrite to hematite	oxidation
2. Calcite to calcium and bicarbonate ions	dissolution
3. Feldspar to clay	hydrolysis
4. Olivine to serpentine	hydrolysis
5. Pyroxene to iron oxide	oxidation

Exercise 5.3 Describing the weathering origins of sands

Sand description	Possible processes
Fragments of coral etc. from a shallow water area near to a reef in Belize	Reefs are constantly being eroded by ocean waves, and the fragments are washed inshore by currents and then further eroded by wave action.
Angular quartz and rock fragments from a glacial stream deposit near Osoyoos	Quartz-bearing rocks have been eroded and transported by a glacier. The fragments may have been moved a short distance by a stream, but not enough to produce rounding.
Rounded grains of olivine and volcanic glass from a beach in Hawaii	The olivine and glass grains are eroded by waves from volcanic rock and then thoroughly rounded by waves on the beach

Exercise 5.4 The soils of Canada

Soil type	Distribution	Explanation
1. Chernozem	Southern prairies	These are dry-climate soils developed on grasslands
2. Luvisol	Northern prairies and BC interior	Soils developed on sedimentary rocks in cool moist climates
3. Podsol	Mountainous parts of BC and large parts of northern Ontario and Quebec	Areas with coniferous forests and moderate climates
4. Brunisol	Boreal forest regions	Cold forested regions with discontinuous permafrost
5. Organic	Hudson Bay and James Bay lowlands	Wetland areas with widespread swamps

Chapter 6

Exercise 6.1 Describe the sediment on a beach

Responses will vary.

Exercise 6.2 Classifying sandstones

Description	Rock name
Angular grains, 85% quartz, 15% feldspar, less than 5% silt and clay	<i>Arkosic arenite</i>
Rounded grains, 99% quartz, less than 2% silt and clay	<i>Quartz arenite</i>
Angular grains, 70% quartz, 20% lithic and 10% feldspar, roughly 20% silt and clay	<i>Lithic wacke</i>

Exercise 6.3 Making evaporite

Responses will vary.

Exercise 6.4 Interpretation of past environments

Description	Source rock	Weathering	Transportation	Dep. environment
1. Cross-bedded quartz sandstone, rounded grains	<i>probably sandstone</i>	<i>strong chemical weathering</i>	<i>wind</i>	<i>desert</i>
2. Feldspathic sandstone and mudstone with volcanic fragments and repetitive graded bedding	<i>granite and volcanic rock</i>	<i>weak chemical weathering</i>	<i>short transport in a river</i>	<i>sub-marine fan</i>
3. Conglomerate with well- rounded pebbles and cobbles, imbricated	<i>granite and volcanic rock</i>	<i>difficult to tell</i>	<i>high-energy river</i>	<i>moderate energy river</i>
4. Limestone breccia with orange-red matrix	<i>limestone</i>	<i>mechanical only</i>	<i>rock fall</i>	<i>talus slope, oxidizing environment</i>

Chapter 7

Exercise 7.1 How long did it take?

It might have taken in the order of 20 to 25 million years for these garnets to form, but even more time is needed than that to produce the rock because we have to account for the sedimentary process and then burial and lithification and then deeper burial to reach metamorphic environment – several tens of millions more years.

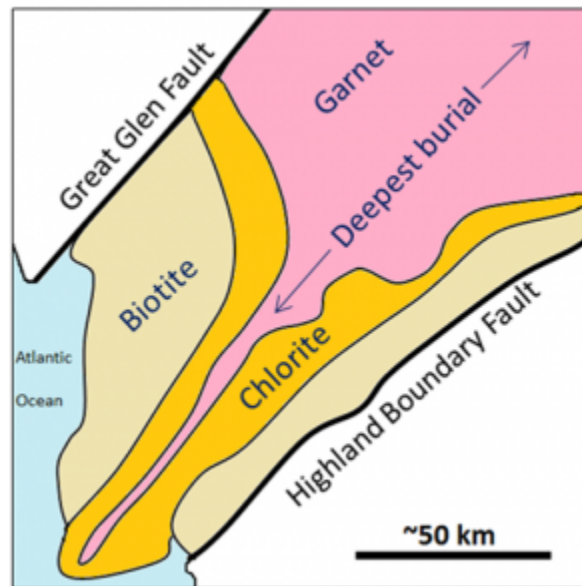
Exercise 7.2 Naming metamorphic rocks

Rock Description	Name
1. A rock with visible minerals of mica and with small crystals of andalusite. The mica crystals are consistently parallel to one another.	<i>Schist or (preferably) Mica-andalusite schist</i>
2. A very hard rock with a granular appearance and a glassy lustre. There is no evidence of foliation.	<i>Probably quartzite</i>
3. A fine-grained rock that splits into wavy sheets. The surfaces of the sheets have a sheen to them.	<i>Phyllite</i>
4. A rock that is dominated by aligned crystals of amphibole.	<i>Amphibolite</i>

Exercise 7.3 Metamorphic rocks in areas with higher geothermal gradients

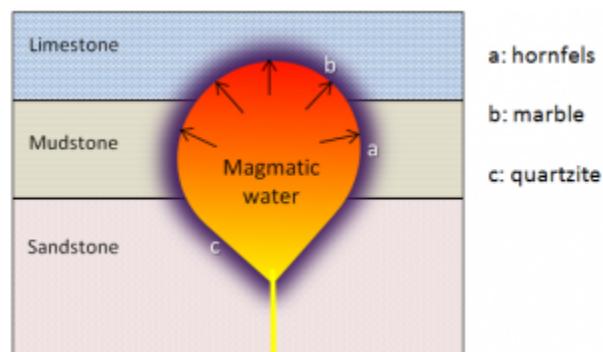
Metamorphic Rock Type	Depth (km)
1. Slate	2 to 5
2. Phyllite	5 to 8
3. Schist	8 to 12
4. Gneiss	12 to 17
5. Migmatite	17 to 25

Exercise 7.4 Scottish metamorphic zones



Metamorphic zones in southern Scotland [Image by Steven Earle]

Exercise 7.5 Contact metamorphism and metasomatism




Contact metamorphic rocks [Image by Steven Earle]

Review: Rock or Mineral?

Mineral or Rock Name	Rock or Mineral?	If it's a mineral, which group does it belong to? If it's a rock, what type is it?
Feldspar	Mineral	Silicate
Calcite	Mineral	Carbonate
Slate	Rock	Metamorphic (regional)
Hematite	Mineral	Oxide
Rhyolite	Rock	Volcanic igneous
Sandstone	Rock	Clastic sedimentary
Diorite	Rock	Intrusive igneous
Olivine	Mineral	Silicate
Pyrite	Mineral	Sulphide
Quartzite	Rock	Metamorphic (regional or contact)
Granite	Rock	Intrusive igneous
Amphibole	Mineral	Silicate
Conglomerate	Rock	Clastic sedimentary
Chert	Rock	Chemical sedimentary
Halite	Mineral	Halide
Gneiss	Rock	Metamorphic (regional)
Mica	Mineral	Silicate
Pyroxene	Mineral	Silicate
Chlorite	Mineral	Silicate
Limestone	Rock	Chemical sedimentary
Andesite	Rock	Volcanic igneous

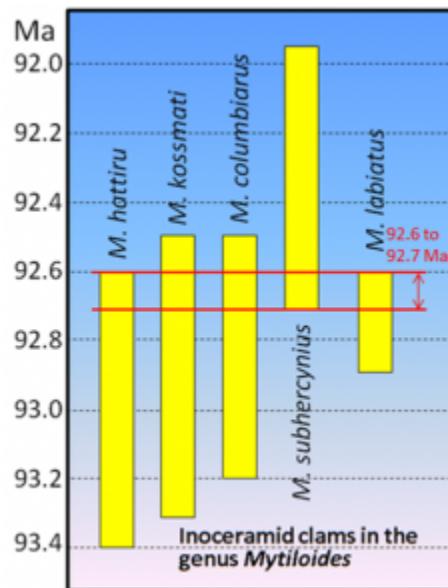
Chapter 8

Exercise 8.1 Cross-cutting relationships



Relative ages: 2: oldest: 3: middle, 1: youngest
[Steven Earle]

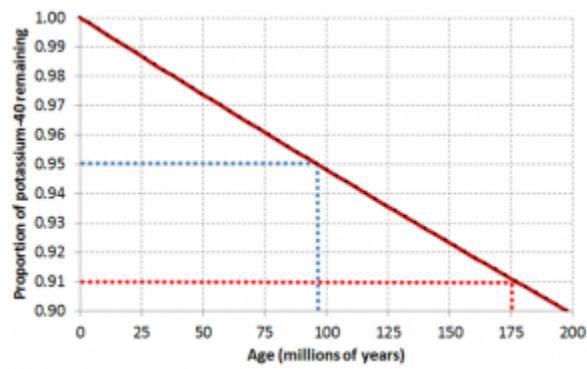
Exercise 8.2 Dating rocks using index fossils



Dating from overlapping fossils [Image by Steven Earle]

The age of the rock is probably between 92.6 and 92.7 Ma. If *M. subhercynius* was not present, the age range would be between 92.6 and 92.9 Ma

Exercise 8.3 Isotopic dating

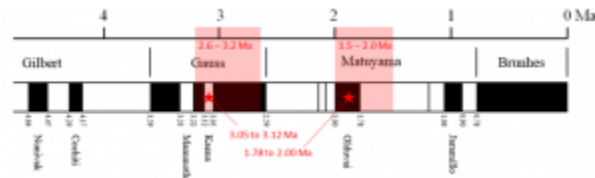


Isotopic dating [Image by Steven Earle]

With a ratio of 0.91 the age is 175 Ma (red dotted line).

Exercise 8.4 Magnetic dating

The possible age ranges are 3.05 to 3.12 Ma and 1.78 to 2.00 Ma



Dating based on magnetic-reversal chronology [Image by Steven Earle]

Exercise 8.5 What happened on your birthday?

Answers will vary.

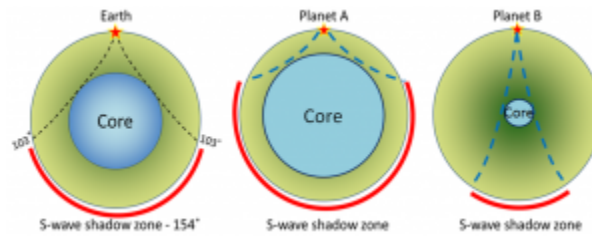
Chapter 9

Exercise 9.1 How soon will seismic waves get here?

Times shown for velocity of 5 kilometres per second (km/s).

1. Nanaimo (120 kilometres), 24 seconds.
2. Surrey (200 kilometres), 40 seconds.
3. Kamloops (390 kilometres), 78 seconds.

Exercise 9.2 Liquid cores in other planets



S-wave shadow zones used to determine the extent of a liquid core [Image by SE]

Exercise 9.3 What does your magnetic dip meter tell you?

1. Up at a shallow angle: Southern hemisphere, near the equator.
2. Parallel to the ground: Equator.
3. Down at a steep angle: Northern hemisphere, near the pole.
4. Straight down: North pole.

Exercise 9.4 Rock density and isostasy

Rock Type	Volumes of individual minerals in 1000 cm ³	Grams of individual minerals in 1000 cm ³	Total Weight (grams)	Density (grams per cubic centimetre, g/cm ³)
Continental Crust (Granite)	Quartz – 180 cm ³ Feldspar – 760 cm ³ Amphibole – 70 cm ³	Quartz – 477 g Feldspar – 1999 g Amphibole – 277 g	2703 g	2.70
Oceanic Crust (Basalt)	Feldspar – 450 cm ³ Amphibole – 50 cm ³ Pyroxene – 500 cm ³	Feldspar – 1184 g Amphibole – 164 g Pyroxene – 1700 g	3048 g	3.05
Mantle (Peridotite)	Pyroxene – 450 cm ³ Olivine – 550 cm ³	Pyroxene – 1530 g Olivine – 1815 g	3345 g	3.35

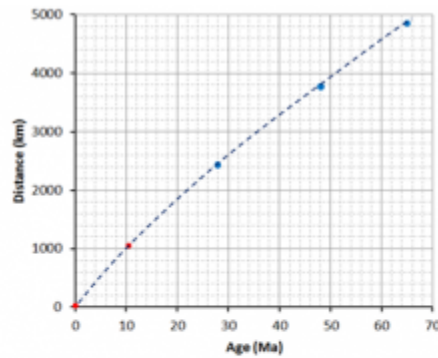
Chapter 10

Exercise 10.1 Fitting the continents together



Pangea [Image by Steven Earle]

Exercise 10.2 Volcanoes and the rate of plate motion



	Age (Ma)	Distance (km)	Rate (cm/y)
Hawaii	0	0	-
Necker	10.3	1,058	10.2
Midway	27.7	2,432	8.8
Koko	48.1	3,758	7.8
Suiko	64.7	4,860	7.5

Pacific Plate rates of motion [Image by Steven Earle]

Exercise 10.3 Paper transform fault model

No answer possible.

Exercise 10.4 A different type of transform fault



Juan de Fuca and Explorer Plates [Image by Steven Earle]

The Juan de Fuca Plate is moving faster than the Explorer Plate, which means that the Juan de Fuca Plate is sliding past the Explorer Plate. There is side-by-side relative motion on this plate boundary, and that makes it a transform fault.

Exercise 10.5 Getting to know the plates and their boundaries



The extents of the Earth's major plates [SE]

Chapter 11

Exercise 11.1 Earthquakes in British Columbia



[Image by Steven Earle from Earthquakes Canada at <http://www.earthquakescanada.nrcan.gc.ca/index-en.php>]

1. Most of the earthquakes between the Juan de Fuca (JDF) and Explorer Plates are related to transform motion along that plate boundary,
2. The string of small earthquakes adjacent to Haida Gwaii are likely aftershocks of the 2012 M7.7 earthquake in that area.
3. Most of the earthquakes around Vancouver Island (V.I.) are related to deformation of the North America Plate continental crust by compression along the subduction zone.
4. Earthquakes that are probably caused by fracking are enclosed within a red circle on the map.

Exercise 11.2 Moment magnitude estimates from earthquake Parameters

Length (km)	Width (km)	Displacement (m)	Comments	MW?
60	15	4	The 1946 Vancouver Island earthquake	7.3
0.4	0.2	.5	The small Vancouver Island earthquake shown in Figure 11.13	4.0
20	8	4	The 2001 Nisqually earthquake described in Exercise 11.3	6.8
1,100	120	10	The 2004 Indian Ocean earthquake	9.0
30	11	4	The 2010 Haiti earthquake	7.0

The largest recorded earthquake had a magnitude of 9.5. Could there be a 10?

To have a magnitude of 10, one possible solution is 2500 kilometres long and 300 kilometres wide with 55 metres of displacement. (Other solutions are possible.) These are unreasonable numbers because subduction zones don't tend to fail over that length (typically not much more than 1200 kilometres), rupture zones cannot be that wide because that takes us into the asthenosphere, and displacements are never likely to be that great.

Exercise 11.3 Estimating intensity from personal observations

Building Type	Floor	Shaking Felt	Lasted (seconds)	Description of Motion	Intensity?
House	1	no	10	Heard a large rumble lasting not even 10 s, mirror swayed	2
House	2	moderate	60	Candles, pictures & CDs on bookshelf moved, towels fell off racks	4
House	1	no		Pots hanging over stove moved and crashed together	3
House	1	weak		Rolling feeling with a sudden stop, picture fell off mantle, chair moved	4
Apartment	1	weak	10	Sounded like a big truck then everything shook for a short period	3
House	1	moderate	20-30	Teacups rattled but didn't fall off	3
Institution	2	moderate	15	Creaking sounds, swaying movement of shelving	3
House	1	moderate	15-30	Bed banging against the wall with me in it, dog barking aggressively	4

Exercise 11.4 Creating liquefaction and discovering the harmonic frequency

No answer possible.

Exercise 11.5 Is your local school on the seismic upgrade list?


Answers will vary.

Chapter 12

Exercise 12.1 Folding style

In order to help with the interpretation, one of the beds has been traced (in yellow) on the diagram below,

and two of the fold axes have been shown (in pink). These folds are symmetrical, and although they are tight they are not isoclinal. They are overturned.



Folded rocks (in yellow) and fold axes (pink) [Image by Steven Earle]

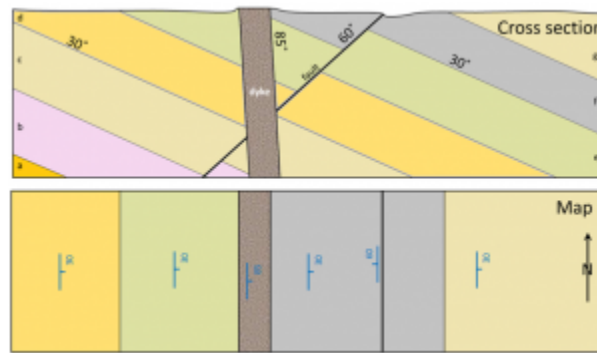
Exercise 12.2 Types of faults

Top left: a normal fault, implying extension
Bottom left: a series of normal faults, extension
Top right: A reverse fault, compression
Bottom right: a right lateral fault (implies that there is shearing, but it is not possible to say if there is extension or compression)

Exercise 12.3 Putting strike and dip on a map here!

See map below for strike and dip symbols. Relative ages, from youngest to oldest:

- dyke (youngest)
- fault
- layer g (although this layer isn't intersected by the fault or the dyke so it is not possible to know that it is older based on the information available)
- layer f
- layer e
- layer d
- layer c
- layer b
- layer a (oldest)



Vertical cross section (above), map view (below)
 [Image by Steven Earle]

Chapter 13

Exercise 13.1 How long does water stay in the atmosphere?

The volume of the oceans is $1,338,000,000 \text{ km}^3$ and the flux rate is approximately the same ($1,580 \text{ km}^3/\text{day}$).

What is the average residence time of a water molecule in the ocean?

$1,338,000,000/1,580 = 846,835$ days average residence time for water in the ocean (or 2320 years)

Exercise 13.2 The effect of a dam on base level

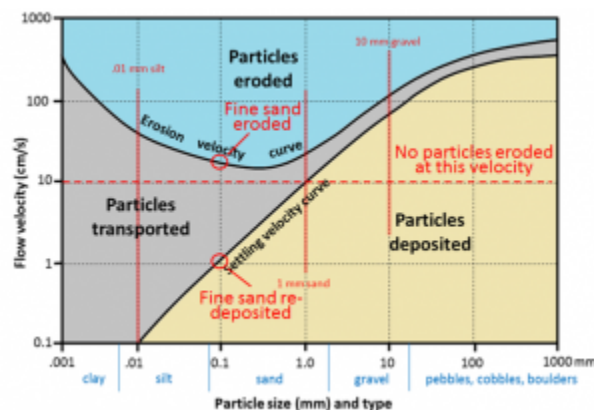
How does the formation of a reservoir affect the stream where it enters the reservoir, and what happens to the sediment it was carrying?

The velocity of the streams slows to zero and most of the sediment is deposited quickly.

The water leaving the dam has no sediment in it. How does this affect the stream below the dam?

With nothing to deposit, the water below the dam can only erode, so there will be enhanced erosion below the dam.

Exercise 13.3 Understanding the Hjulström-Sundborg Diagram



[Image by Steven Earle]

1. A fine sand grain (0.1 millimetres) is resting on the bottom of a stream bed.
 1. What stream velocity will it take to get that sand grain into suspension? *Roughly 20 centimetres per second.*
 2. Once the particle is in suspension, the velocity starts to drop. At what velocity will it finally come back to rest on the stream bed? *Roughly 1 centimetres per second.*
2. A stream is flowing at 10 centimetres per second (which means it takes 10 seconds to go 1 metre, and that's pretty slow).
 1. What size of particles can be eroded at 10 centimetres per second? *No particles, of any size, will be eroded at 10 centimetres per second, although particles smaller than 1 millimetre that are already in suspension will stay in suspension.*
 2. What is the largest particle that, once already in suspension, will remain in suspension at 10 centimetres per second? *A 1 millimetre diameter particle should remain in suspension at 10 centimetres per second.*

Exercise 13.4 Determining stream gradients



Gradients of Priest Creek (in red) [Image by Steven Earle]

The length of the creek between 1,600 metres and 1,300 metres elevation is 2.4 kilometres, so the gradient is 300 divided by 2.4 = 125 metres per kilometre.

1. Use the scale bar to estimate the distance between 1,300 metres and 600 metres and then calculate that gradient. *5.2 kilometres, with a gradient of 700 divided by 5.2 = 134 metres per kilometre.*
2. Estimate the gradient between 600 metres and 400 metres. *3.6 kilometres, with a gradient of 200 divided by 3.6 = 56 metres per kilometre.*
3. Estimate the gradient between 400 metres on Priest Creek and the point where Mission Creek

enters Okanagan Lake. 4 kilometres, with a gradient of 60 divided by 4.0 = 15 metres per kilometre.

Exercise 13.5 Flood probability on the Bow River

1. Calculate the recurrence interval for the second largest flood (1932, 1,520 m³/s). $R_i = 96/2 = 48$ years
2. What is the probability that a flood of 1,520 m³/s will happen next year? $1/48 = 0.02$ or 2%
3. Examine the 100-year trend for floods on the Bow River. If you ignore the major floods (the labelled ones), what is the general trend of peak discharges over that time? *In general the peak discharges are getting lower (from an average of around 400 m³/s in 1915 to an average of about 300 m³/s in 2015)*

Chapter 14

Exercise 14.1 How long will it take?

$$i = \frac{37 \text{ m} - 21 \text{ m}}{80 \text{ m}} = 0.2, K = 0.0002 \text{ m/s}, \quad \text{and} \quad n = 0.25, \quad \text{so}$$

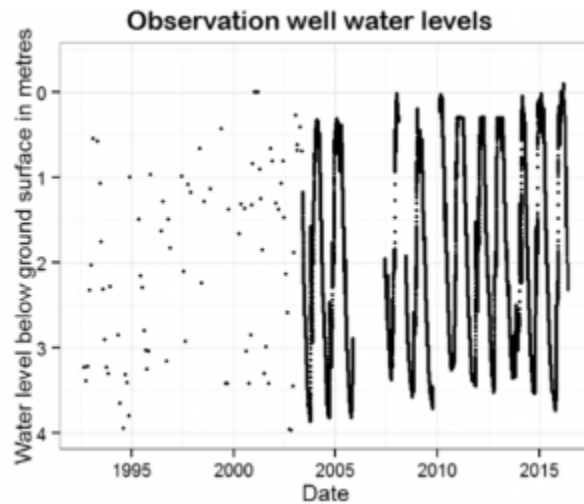
$$V = \frac{0.0002 \text{ m/s} \times 0.2}{0.25} = 0.00016 \text{ m/s}.$$

At that rate, it will take 500,000 seconds for the groundwater to flow from the gas station to the stream. That converts to 138 hours, or about 6 days.

Exercise 14.2 Cone of depression

The cone of depression increases the gradient of the water table in the area around the well. That should increase the rate at which water flows towards the well.

Exercise 14.3 What is your water table doing?



[Image from the BC Ministry of the Environment at http://www.env.gov.bc.ca/wsd/data_searches/obswell/map/]

The water-level for a random observation well in BC is shown above. The water table is slowly rising at this location. Since 2004 the lowest water level has risen from just above 4 m below surface to around 3.6 m above surface and the highest level has risen from around 0.3 m below surface to nearly at surface (0 m). Prior to 2004, where the points are not joined with lines, the trend appears to be similar.

Exercise 14.4 What goes on at your landfill?

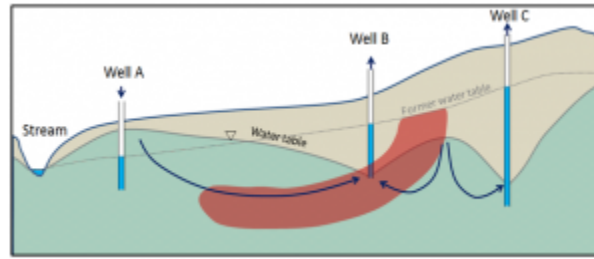
Responses will vary.

Exercise 14.5 Finding a leaking UST in your community

Responses will vary.

Exercise 14.6 Manipulating a contaminant plume

What could you do at wells A and C to prevent this? Explain and use the diagram below to illustrate the expected changes to the water table and the movement of the plume.



Implications of pumping water from wells B and C and injecting water into well A [Image by Steven Earle]

Possible Answer: Injection into well A will cause water table to rise there (like the reverse of a cone of depression), thus reversing flow direction to the right of well A and moving the plume towards Well B. Extraction from Wells B and C will cause cones of depression and help to reverse the flow and pull the plume back from the stream. Both wells B and C may receive contaminants and so the water from both may need treatment.

Chapter 15

Exercise 15.1 Sand and water

Responses will vary.

Exercise 15.2 Classifying slope failures



[Image by Steven Earle]

Exercise 15.3 How much does a house weigh and can it contribute to a slope failure?

A typical 150 m² (approximately 1,600 ft²) wood-frame house with a basement and a concrete

foundation weighs about 145 t (metric tonnes). But most houses are built on foundations that are excavated into the ground. This involves digging a hole and taking some material away, so we need to subtract what that excavated material weighs. Assuming our 150 m² house required an excavation that was 15 m by 11 m by 1 m deep, that's 165 m³ of "dirt," which typically has a density of about 1.6 t per m³.

165 m³ of excavated soil × 1.6 t/m³ = 264 t – thus the excavated material weighs about 1.8 times as much as the house. In this case weight has been removed from the slope by building the house.

Chapter 16

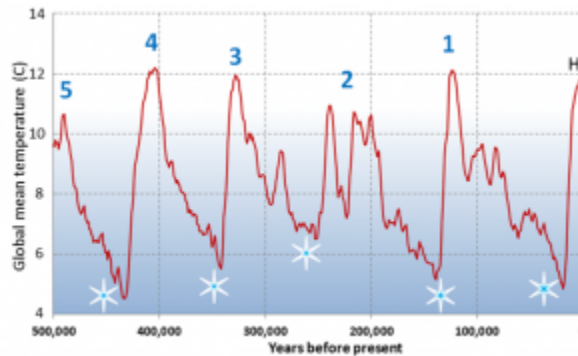
Exercise 16.1 Pleistocene glacials and interglacials

Describe the nature of temperature change that followed each of these glacial periods.

In each case the temperature drops slowly building to a peak of glaciation, and then each of the glacial periods is followed by a very rapid increase in temperature.

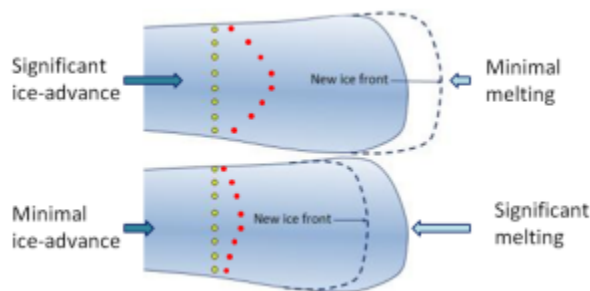
The current interglacial (Holocene) is marked with an H. Point out the previous five interglacial periods.

The previous 5 interglacials are labelled 1 to 5 on the diagram below. Interglacial 2 had two distinct warm episodes.



[Image by Steven Earle]

Exercise 16.2 Ice advance and retreat




Glacial advance (top) and retreat (bottom) [Image by Steven Earle]

The red dots show the new positions of the markers.


Exercise 16.3 Identify glacial erosion features

1. *col*
2. *arête*
3. *horn*
4. *cirque*
5. *truncated spur* (other *arêtes* are labelled in the image)



[Image by Steven Earle after http://en.wikipedia.org/wiki/Mount_Assiniboine#/media/File:Mount_Assiniboine_Sunburst_Lake.jpg]

Exercise 16.4 Identify glacial depositional environments



[a] glaciofluvial sand, (b) lodgement till, (c) glaciolacustrine clay with drop stones, (d) ablation till, and (e) glaciomarine silt and clay

[Image by Steven Earle after USGS at <http://water.usgs.gov/edu/gallery/glacier-satellite.html>]

Chapter 17

Exercise 17.1 Wave height versus length

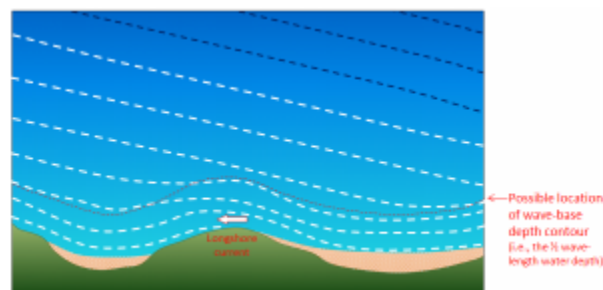
This table shows the typical amplitudes and wavelengths of waves generated under different wind conditions. The steepness of a wave can be determined from these numbers and is related to the ratio: amplitude/wavelength.

1. Calculate these ratios for the waves shown.
2. How would these ratios change with increasing distance from the wind that produced the waves?

Amplitude (metres)	Wavelength (metres)	Ratio (amplitude/wavelength)
0.27	8.5	0.03
1.5	33.8	0.04
4.1	76.5	0.05
8.5	136	0.06
14.8	212	0.07

Within increasing distance from the source the wave heights would gradually decrease and so the ratios would decrease.

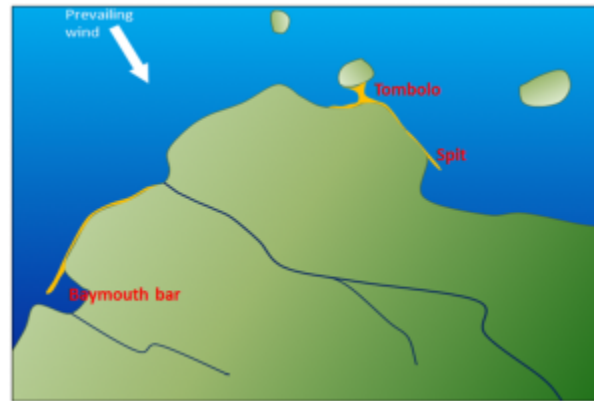
Exercise 17.2 Wave refraction



[Image by Steven Earle]

Exercise 17.3 Beach forms

Barrier islands could form if this was a low-relief coast with an abundant supply of sediment from large rivers.

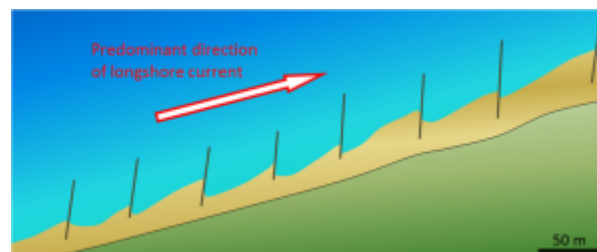


Possible locations of coastal deposits [Image by Steven Earle]

Exercise 17.4 A Holocene uplifted shore

The melting of glacial ice around the world at the end of the last glaciation (between 14 and 8 ka – see Figure 17.25) led to relatively rapid sea-level rise (by a total of approximately 125 m) which resulted in this area being submerged. That was a eustatic process. In response to the loss of ice in this region of coastal British Columbia there was a slower isostatic rebound of the crust, which is why this area is now back up above sea level.

Exercise 17.5 Crescent Beach groynes

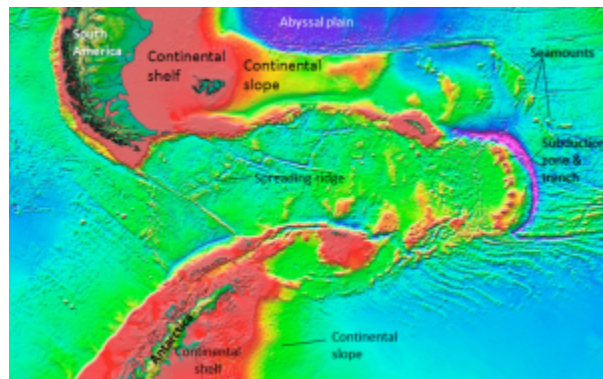


[Image by Steven Earle]

Chapter 18

Exercise 18.1 Visualizing sea-floor topography

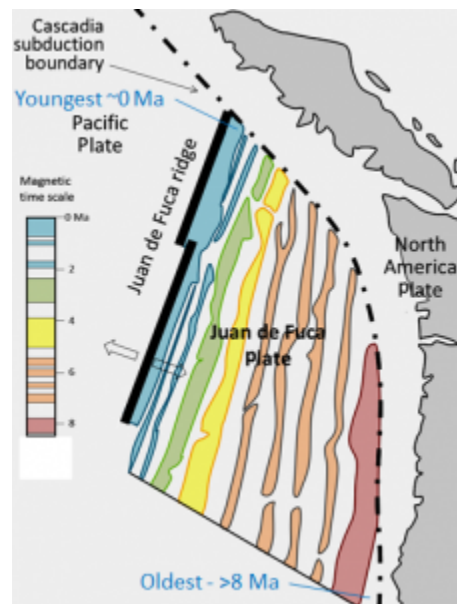
1. *see map, below*
2. *This is the area between the southern tip of South America (Cape Horn) and the Antarctic Peninsula. The body of water between the two is the Drake Passage.*



[Image from NASA/CNES at: http://topex.ucsd.edu/marine_topo/jpg_images/topo16.jpg]

Exercise 18.2 The age of subducting crust

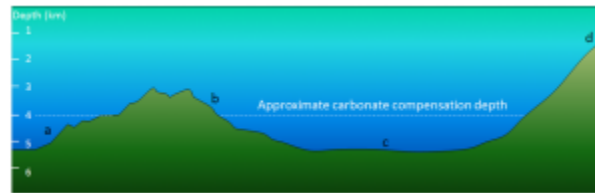
1. *The oldest is in the southeast and is greater than 8 Ma (see map below).*
2. *The youngest is in the north and is close to 0 Ma.*



[Image by Steven Earle]

Exercise 18.3 What type of sediment

1. *siliceous ooze or clay*
2. *carbonate ooze*
3. *siliceous ooze or clay*
4. *coarse terrigenous or carbonate ooze*



[Image by Steven Earle]

Exercise 18.4 Salt chuck

No answer possible.

Exercise 18.5 Understanding the Coriolis effect

No answer possible.

Chapter 19

Exercise 19.1 Climate Change at the K-Pg Boundary

The short-term climate impact was significant cooling because the dust (and sulphate aerosols) would have blocked incoming sunlight. This effect may have lasted for several years, but its intensity would have decreased over time.

The longer-term impact would have been warming caused by the greenhouse effect of the carbon dioxide.

Exercise 19.2 Albedo Implications of Forest Harvesting

Clear-cutting (or any logging activity) leads to a net increase in albedo, so the albedo-only impact is cooling.

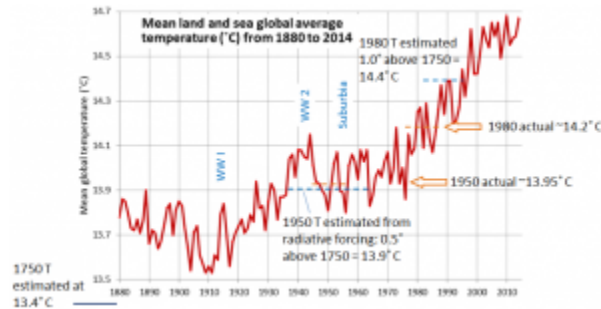
Exercise 19.3 What Does Radiative Forcing Tell Us?

*Using the $\Delta T = \Delta F * 0.8$ equation the expected temperatures for 2011, 1980 and 1950 compared with the estimated 13.4 C in 1750 should be:*

$$2011 \text{ vs } 1750 \Delta T = 0.8 * 2.29 = 1.8^{\circ}\text{C} \quad (13.4 + 1.8 = 15.2)$$

$$1980 \text{ vs } 1750 \Delta T = 0.8 * 1.25 = 1.0^{\circ}\text{C} \quad (13.4 + 1.0 = 14.4)$$

$$1950 \text{ vs } 1750 \Delta T = 0.8 * 0.57 = 0.5^{\circ}\text{C} \quad (13.4 + 0.5 = 13.9)$$



[SE from data at NASA at: http://data.giss.nasa.gov/gistemp/tabledata_v3/GLB.Ts+dSST.txt]

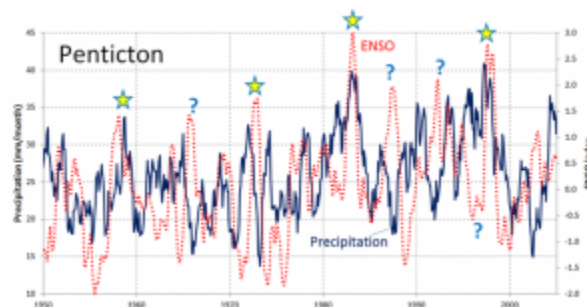
Based on this reasoning the estimated temperature for 1950 is 13.9° C (which is close to the actual of 14.0 ° C), while that for 1980 is 14.4° C, which is well above the actual of 14.2° C. It’s also clear that we didn’t reach 15.2° C by 2011, because even in the hottest year so far (2015) the global average temperature was only 14.8° C.

So while the $\Delta T = \Delta F * 0.8$ equation is useful, it appears to overestimate the temperature, probably because it takes some time (years to decades) for the climate to catch up to the forcing.

Exercise 19.4 Rainfall and ENSO

Describe the relationship between ENSO and precipitation in B.C.’s southern interior.

As shown on the diagram below, there are some examples where a strong ENSO signal corresponds with very strong precipitation in the interior (and on the coast as well). The two strongest El Niños (1983 and 1998) shown correspond with the highest recorded precipitation levels in Penticton. Some other strong El Niños (1958 and 1973) are associated with strong precipitation within 6 months of the ENSO peak, but others show a negative correlation between ENSO and rainfall (marked with “?”).



[SE using climate data from Environment Canada, and ENSO data from: <http://www.esrl.noaa.gov/psd/ens/mei/table.html>]

Exercise 19.5 How Can You Reduce Your Impact on the Climate?

Responses will vary.

Chapter 20

Exercise 20.1 Where does it come from?

Responses will vary.

Exercise 20.2 The importance of heat and heat engines

Deposit Type	Is Heat a Factor?	If So, What Is the Role of the Heat?
Magmatic	Yes	Heat is necessary for melting of the rock to produce magma
Volcanogenic massive sulphide	Yes	Heat is necessary for melting of the rock to produce magma
Porphyry	Yes	Heat contained within the porphyritic intrusion drives the convection system
Banded iron formation	No	Iron is deposited from cold ocean water
Unconformity-type uranium	Probably	Uranium solubility is enhanced at higher water temperatures

Exercise 20.3 Sources of important lighter metals

Element	Silicon	Calcium	Sodium	Potassium	Magnesium
Source(s)	quartz sand	lime-stone	halite (NaCl)	sylvite (KCl)	dolomite ((Ca,Mg)CO ₃), magnesite (MgCO ₃), salt lakes and the ocean

Exercise 20.4 Interpreting a seismic profile

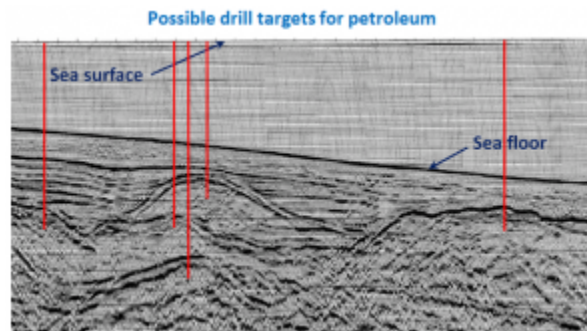
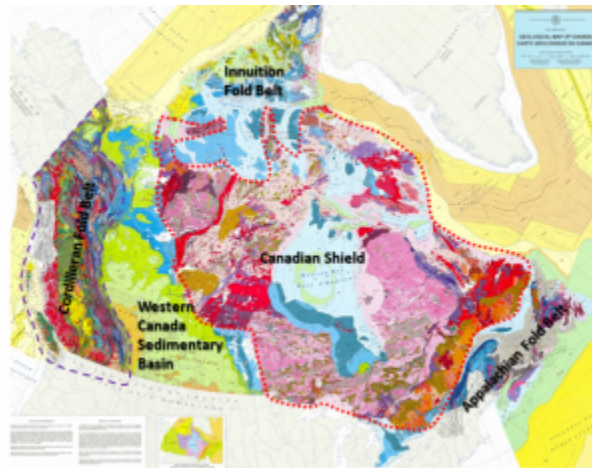


Image by Steven Earle after USGS at:
<http://walrus.wr.usgs.gov/infobank/programs/html/definition/seis.html>

Chapter 21

Exercise 21.1 Finding the Geological Provinces of Canada



[SE after Geological Survey of Canada]

Exercise 21.2 Purcell Rocks Down Under?

The Mesoproterozoic quartzite phyllite schist of Tasmania may correlate with the Purcell rocks of Canada. The main difference is that while the Tasmanian rocks are metamorphosed, the Purcell rocks are generally unmetamorphosed.

Exercise 21.3 What Is Vancouver Island Made Of?

1. Less than 10% of Vancouver Island is Paleozoic (the Devonian volcanic rocks – Dv).
2. The most common rock type is the Triassic Karmutsen Volcanic rock (basalt – Tv). The most common rocks by age are the Mesozoic rocks (Jurassic volcanic, Jurassic granite and Triassic volcanic).

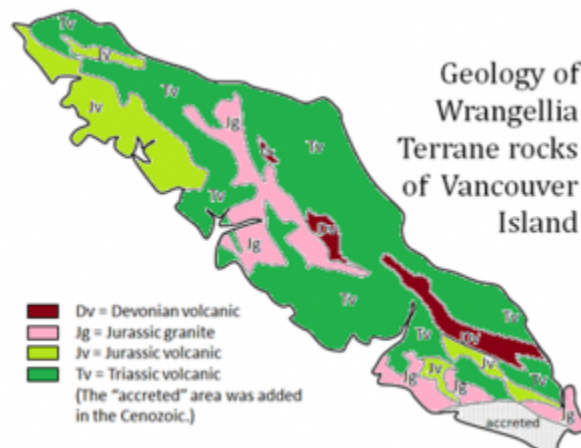


Image by Steven Earle.

Exercise 21.4 Dinosaur country?

This Cretaceous Dinosaur Park Formation sandstone is clearly cross-bedded implying that it was deposited in a stream environment.

Exercise 21.5 The volume of the Paskapoo Formation

1. *The 60,000 km² area of source rock would have to have been eroded to a depth of 750 m to create 45,000 km³ of sediment*
2. *500 m is 500,000 mm so the rate is 500,000 mm/ 4,000,000 years = 0.125 mm/year*

Chapter 22

Exercise 22.1 How do we know what other planets are like inside?

Table 22.2 Find the fraction of volume that is core

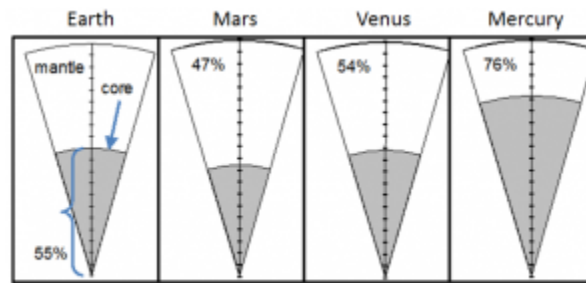
Description	Earth	Mars	Venus	Mercury
Planet density (uncompressed) in g/cm ³	4.05	3.74	4.00	5.30
Percent core	16.8%	10.3%	15.8%	43.2%

Table 22.3 Find the volume of the core for each planet

Description	Earth	Mars	Venus	Mercury
Unsqueezed planet volume – km ³	1.47 x 10 ¹²	1.72 x 10 ¹¹	1.22 x 10 ¹²	6.23 x 10 ¹⁰
Core volume – km³	2.48 x 10¹¹	1.77 x 10 ¹⁰	1.92 x 10 ¹¹	2.69 x 10 ¹⁰

Table 22.4 Find the percent of each planet's radius that is core

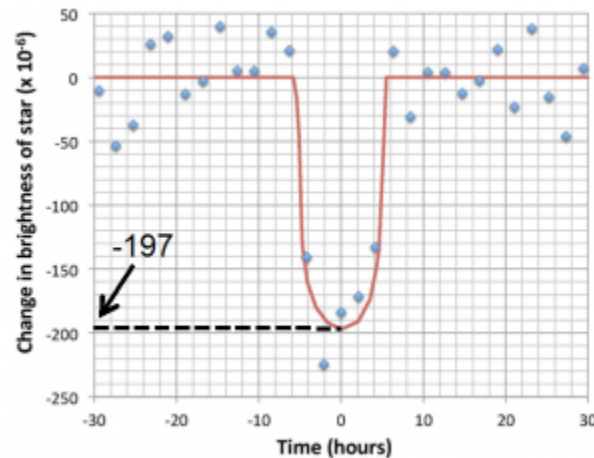
Description	Earth	Mars	Venus	Mercury
Unsqueezed core radius in km	3900	1617	3581	1858
Unsqueezed planet radius in km	7059	3447	6623	2458
Percent of radius that is core (see diagram below)	55%	47%	54%	76%



Planet diagram – The diagrams represent a wedge of the planet from surface to center. The distance between each tick mark is 5% of the radius.

Planet diagram – the diagrams represent a wedge of the planet from surface to centre. The distance between each tick mark is 5% of the radius. Image by Karla Panchuk.

Exercise 22.2 How do we know the sizes of exoplanets?



Plot showing how the star Kepler-452 dims as the planet Kepler-452b moves in front of it. Image by Karla Panchuk after Jenkins, J. et al, 2015, *Discovery and validation of Kepler-452b: a 1.6REarth super Earth exoplanet in the habitable zone of a G2 star, Astronomical Journal, V 150, DOI 10.1088/0004-6256/150/2/56.*

Table 22.5 Calculate the radius of star Kepler-452

Description	Sun	Kepler-452	Ratio
Temperature (degrees Kelvin)	5778	5757	1.0036
Luminosity (x 10 ²⁶ Watts)	3.846	4.615	1.20
Radius (km)	696,300	768,317	

* The temperatures of the sun and Kepler-452 are very similar, but the small difference is important. Keep 4 decimal places.

Table 22.6 Calculate the radius of planet Kepler-452b

Decrease in brightness*	Earth radius (km)	Kepler-452b radius r_{planet} (km)	Kepler-452b radius/ Earth radius
197×10^{-6}	6378	10,784	1.7

* Because we know this is a decrease, you don't need to keep the negative sign.
Answers for Chapter 22 were provided by Karla Panchuk.